


**[1] Read and trace:**


Saturday	Saturday
Sunday	Sunday
Monday	Monday
Tuesday	Tuesday
Wednesday	Wednesday
Thursday	Thursday
Friday	Friday

**[2] Read and trace:**


1	2	3	4	5
one	Two	Three	Four	Five
6	7	8	9	10
Six	Seven	Eight	Nine	Ten
11	12	13	14	15
Eleven	Twelve	Thirteen	Fourteen	Fifteen
16	17	18	19	20
Sixteen	Seventeen	Eighteen	Nineteen	Twenty
30	40	50	60	70
Thirty	Forty	Fifty	Sixty	Seventy
80	90	100	0	0
Eighty	Ninety	Hundred	Zero	Zero

**[3] Circle the correct number:**


1	2	3
---	---	---



1	2	3
---	---	---



1	2	3
---	---	---



7

8

9



3

4

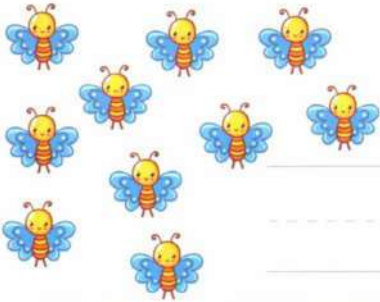
5



3

4


5



6

3


4



7

8


9



6

7


8



11

12


13



10

11

12



6

7


8



10

11


12



6

7


8



2

3


4



14

15

16



14

15


16



10

11


12



7

9


8



6

7


8



6

7


8



14

15


16



15

16

17



6

7

8



15

16

17



6

7

8




15

16

17






14

15

16



14

15


16



10

11


12



18

19


20



18

19


20



6

7


8



18

19

20



15

16

17



6

7

8



15

16


17



6

7

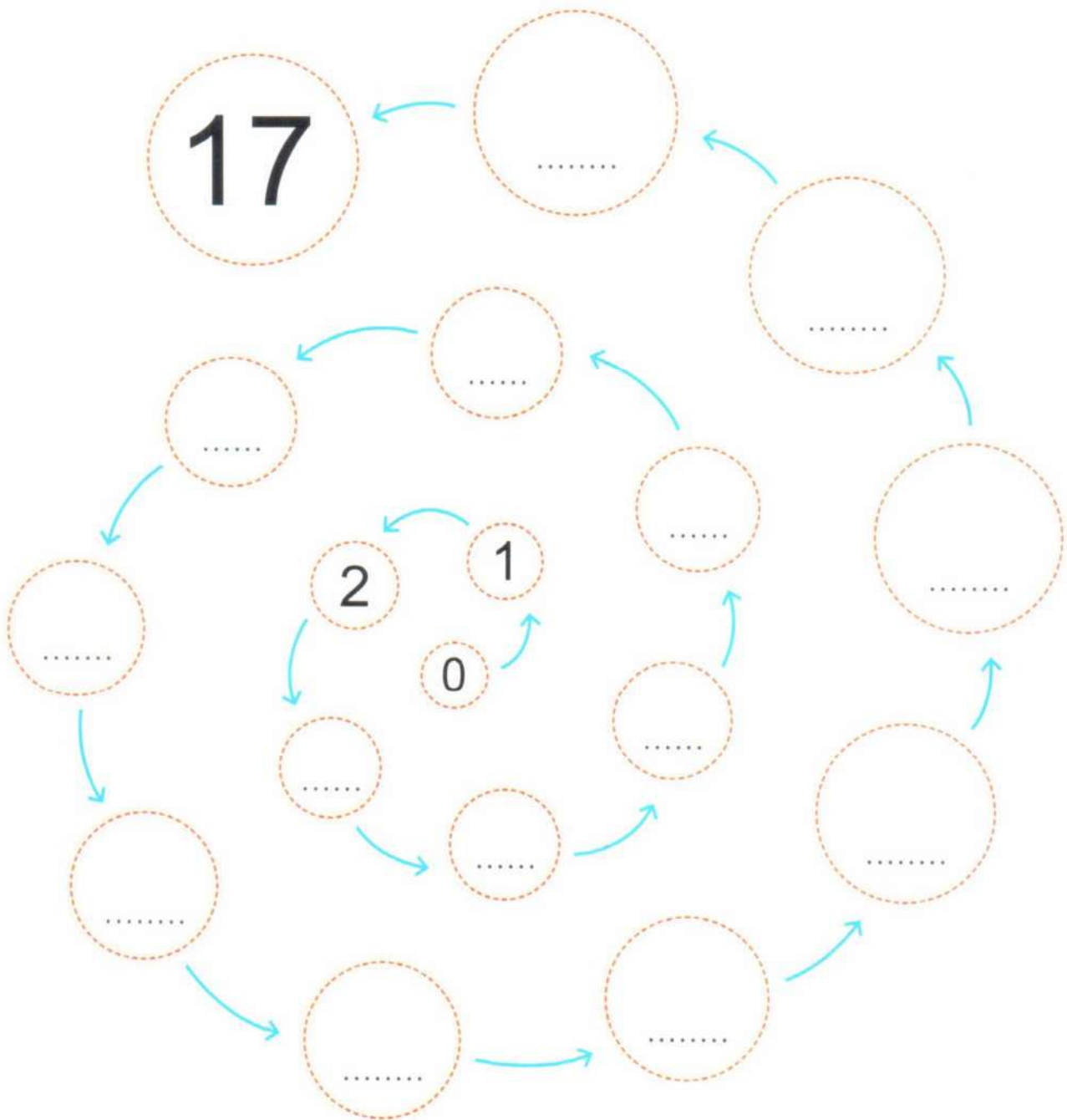
8



15

16

17

**[4] Complete:****[5] Complete using (>), (<) or (=):**

2 ..... 3

4 ..... 5

6 ..... 8

9 ..... 0

6 ..... SIX

5 ..... 1

[6] Complete with the suitable number:

$$\dots > 0$$

$$\dots < 9$$

$$\dots < 10$$






$$\dots > 16$$

$$\dots < 16$$

$$\dots > 15$$


[7] Color according to the number:



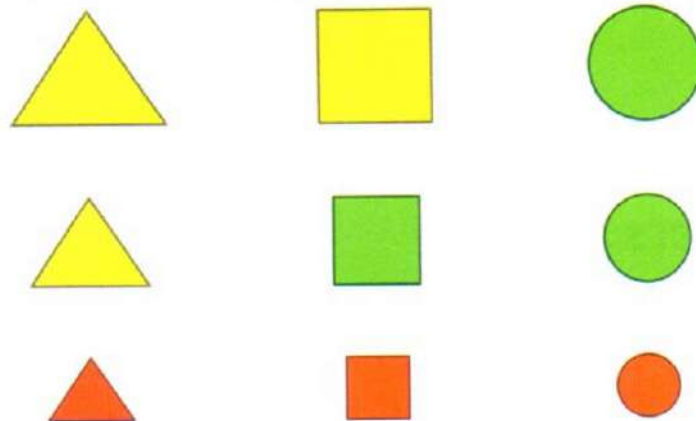
7					
6					
5					
4					
3					
2					
1					
					




[8] Classify according to the shape:



[9] Classify according to the color:

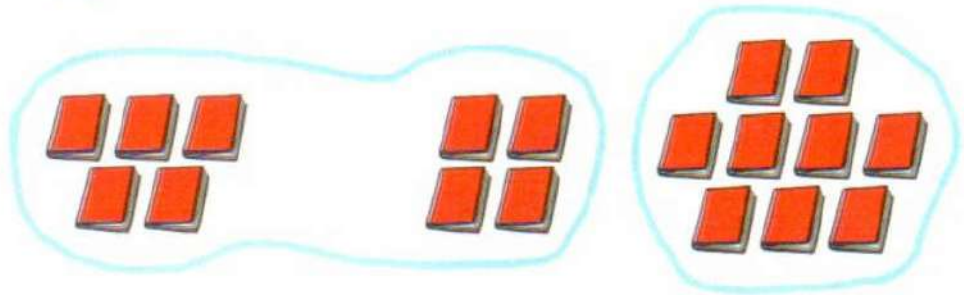


[10] Classify according to the size:





Wael has 5  in Arabic and 4  in English  
How many  does Wael have ?




What Wael has =  +  =  


**[11] Complete as in the example:**




$$5 + 4 = 9$$




$$\dots\dots\dots + \dots\dots\dots = \dots\dots\dots$$



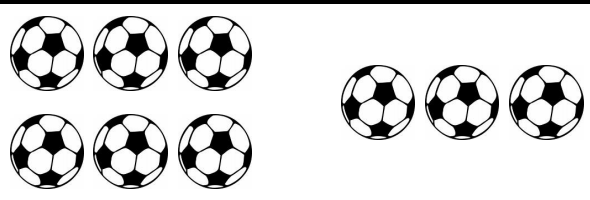
$$\dots\dots\dots + \dots\dots\dots = \dots\dots\dots$$



$$\dots\dots\dots + \dots\dots\dots = \dots\dots\dots$$








$$\dots\dots\dots + \dots\dots\dots = \dots\dots\dots$$



$$\dots\dots\dots + \dots\dots\dots = \dots\dots\dots$$

**[12] Subtract:**

	$\begin{array}{r} 4 \\ -2 \\ \hline \end{array}$
	$\begin{array}{r} 5 \\ -2 \\ \hline \end{array}$
	$\begin{array}{r} 6 \\ -3 \\ \hline \end{array}$
	$\begin{array}{r} 7 \\ -3 \\ \hline \end{array}$
	$\begin{array}{r} 8 \\ -2 \\ \hline \end{array}$

**[13] Circle:**

# [14] Belong and does not belong

## Fruits



## Wild animals



## Pets



## Flowers





**[15] Add:**

$$8 + 5 = \dots$$

$$6 + 4 = \dots$$

$$9 + 7 = \dots$$

$$6 + 9 = \dots$$

$$5 + 3 = \dots$$

$$8 + 4 = \dots$$

**[16] Circle the correct answer:**

$$1 + 3 = \dots\dots\dots (3, 4, 5)$$

$$2 + 3 = \dots\dots\dots (3, 4, 5)$$


$$4 + 3 = \dots\dots\dots (7, 6, 5)$$

$$5 + 4 = \dots\dots\dots (7, 8, 9)$$

$$2 + 5 = \dots\dots\dots (5, 6, 7)$$

$$2 + 4 = \dots\dots\dots (2, 4, 6)$$

**[17] Circle the group that has 1 more than the first one:**



**[18] Circle the group that has 1 less than the first one:**

