



1 Choose the correct answer :

(1) Two hundred and thirteen (in digits) :

a 230

b 203

c 233

d 213

(2) Nine hundred and nine (in digits) :

a 909

b 990

c 919

d 999

(3) sevnty nine =

a 97

b 90

c 70

d 79

(4) The value of 4 in 43 is

a 4

b 40

c 14

d 44

(5) 5 tens + 3 units =

a 35

b 305

c 53

d 503

2 Write the following numbers in digits :

a Two hundred and five :

b Two hundred and fifty :

c Two hundred and fifteen :

d Two hundred and fifty one :

e Two hundred and fifty five :

3 Write the following numbers in letters :

a 700 :

b 705 :

c 750 :

d 715 :

e 755 :

4

Arrange in an ascending order : 47 , 33 , 98 , 55 , 39

	,		,		,		,	
--	---	--	---	--	---	--	---	--

Find the result :

$$74 - 34 = \dots \dots$$

$$35 + 14 = \dots \dots$$



Primary 2

1 Choose the correct answer :

(1) 3 tens + 5 tens =

a 35

b 53

c 8

d 80

(2) Eighth hundred and sixteen (in letters) :

a 816

b 861

c 860

d 866

(3) 5 hundreds = tens

a 5

b 50

c 500

d 15

(4) 500 + 200 = hundreds

a 700

b 70

c 7

d 52

(5) 277 , 278 , 279 ,

a 210

b 270

c 289

d 280

2 Complete the following :

a 6 tens + tens = 9 tens

b hundreds + 3 hundreds = 7 hundreds

c 300 , 400 , , , , 800

d 4 hundreds = tens

e

230 232 234 235 237

3 Write the following numbers in letters :

a 785 :

b 439 :

c 502 :

4 Write the following numbers in digits :

a Nine hundred and sixty four :

b Two hundred and thirteen :

c Seven hundred and thirty :

d Four hundred and two :

e Seven hundred :



1 Choose the correct answer :

(1) 9 hundreds and 3 tens =

a 903

b 930

c 390

d 309

(2) $3 + 50 + 200 = \dots\dots\dots$

a 352

b 253

c 532

d 235

(3) Two hundred and seventy =

a 217

b 207

c 270

d 277

(4) 5 tens + 3 hundreds + 8 units =

a 538

b 583

c 385

d 358

(5) $5 + 0 + 2 = \dots\dots\dots$

a 502

b 52

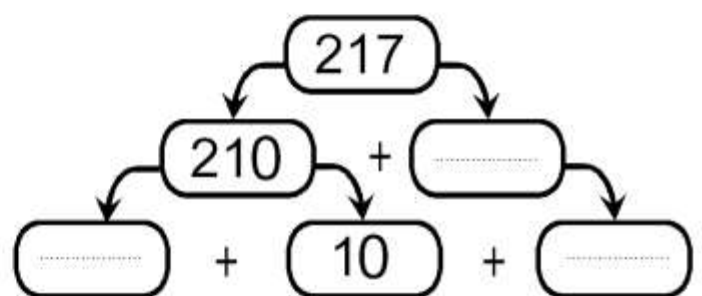
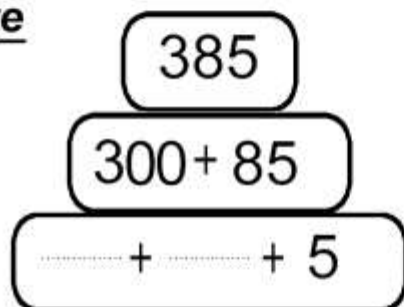
c 7

d 25

2 Complete the following :

a $785 = \dots\dots\dots$ hundreds + $\dots\dots\dots$ units + $\dots\dots\dots$ tensb $578 = 500 + 70 + \dots\dots\dots$ c 5 hundreds , 7 tens and 6 units : The number is $\dots\dots\dots$ and it is read as $\dots\dots\dots$ d $700 + 2 + 40 = \dots\dots\dots$ e 60 tens = $\dots\dots\dots$ hundreds

3 Complete



4 Match

Two hundred and fifteen

Six hundred and thirty

 $200 + 50$ $600 + 10 + 3$

2 hundreds + 5 units

250

 $200 + 10 + 5$ $600 + 30$

205

6 hundreds + 1 ten + 3 units



Primary 2

1 Choose the correct answer :

- (1) The place-value of the digit 5 in the number 358 is.....
 a 10 b units c tens d hundreds
- (2) The value of the digit 7 in the number 847 is
 a 7 b 70 c 700 d units
- (3) Nine hundreds and sixty two (in letters) :
 a 926 b 962 c 960 d 902
- (4) 5 tens + 3 hundreds + 7 units =
 a 537 b 375 c 735 d 357
- (5) $20 + 0 + 7 = \dots\dots\dots$
 a 207 b 27 c 270 d 9

2 Complete the following :

- a 708 (in letters) :
- b The place-value of 5 in the number 358 is
- c The value of 6 in the number 627 is
- d 6 tens + 4 hundreds =
- e $2 + 400 + 30 = \dots\dots\dots$

3 Join the cards with equal numbers :

6 hundreds, 2 tens and 7 units

627

 $600 + 20 + 7$ $700 + 62$

762

7 hundreds, 6 tens and 2 units

4 Write the value and the place value of the encircled number :

The number	The value	The place-value
⑤ 4 8
6 ⑦ 3
3 1 ①



1 Choose the correct answer :

(1) The greatest number formed from the digits (6 , 2 and 9) is

- a** 629 **b** 962 **c** 269 **d** 296

(2) The smallest number formed from the digits (3 , 8 and 0) is

- a** 380 **b** 830 **c** 830 **d** 308

(3) Seven hundred and nineteen (in digits) :

- a** 719 **b** 790 **c** 709 **d** 799

(4) The value of 8 in the number 285 is

- a** 8 **b** 80 **c** 800 **d** 88

(5) 2 hundreds = tens

- a** 2 **b** 20 **c** 200 **d** 22

2 Complete the following :

a 5 hundreds , 4 tens and 8 units = (in digits)

b The number 718 is read as

c 4 tens + tens = 7 tens.

d 60 tens = hundreds. **e** = 900 + 60 + 3

3 Write all numbers that can be formed from the digits (5 , 4 and 3) :

.....
-------	-------	-------	-------	-------	-------

The greatest number is :

The smallest number is :

4 Complete using the suitable sign (< , = or >) :

a 345 354 **d** 20 tens + 3 hundreds 320

b 40 tens 4 hundreds **e** 9 hundreds 300 + 300

c 254 2 + 50 + 400



Primary 2

1 Choose the correct answer :

(1) The greatest 3-digit number is

- a** 999 **b** 111 **c** 987 **d** 102

(2) The smallest 3-digit number formed from different digits :

- a** 100 **b** 111 **c** 123 **d** 102

(3) The place-value of 7 in the number 785 is

- a** 700 **b** hundreds **c** tens **d** units

(4) The number just after 759 is

- a** 769 **b** 760 **c** 758 **d** 800

(5) $3 + 0 + 4 = \dots\dots\dots$

- a** 7 **b** 34 **c** 304 **d** 43

2 Complete the following :

a The greatest 3-different digit number is**b** The value of the digit 8 in the number 843 is**c** 263 is read as**d** The smallest number formed from the digits 8 , 2 and 6 is**e** = 5 hundreds + 2 tens3 **a** Arrange in a descending order : 500 , 555 , 115 , 905 , 455

..... , , , ,

b Arrange in a descending order : 700 , 77 , 770 , 70 , 707

..... , , , ,

4 **a** Complete using the suitable sign ((< , = or >)):(1) 9 tens $700 + 200$ (3) 784 748 (2) 467 $4 + 60 + 700$ (4) 285 $200 + 58$ **b** Complete in the same pattern :

458 , 459 , 460 , ,



1 Choose the correct answer :

- a The place-value of the digit 9 in 975 is ... [units - tens - hundreds]
- b The **smallest** 3- different-digit number is [100 - 123 - 102 - 999]
- c 2 units + 5 hundreds + 6 tens = [265 - 652 - 562 - 256]
- d $985 = \dots + 80 + 900$ [500 - 5 - 50 - 900]
- e The number just after 571 is [562 - 572 - 563 - 662]

2 Complete the following :

- a The **smallest** number formed from 9 , 0 and 2 is
- b The value of the digit 4 in 245 is
- c 5 hundreds = tens
- d The smallest 3-digit number is
- e 9 hundred , 5 tens and 7 units : the number is
and is read

3 Complete using (<) , (=) or (>) :

- a 9 units , 3 tens and 6 hundreds 639
- b 915 $9 + 10 + 500$
- c 520 2 hundreds + 5 tens
- d Nine hundred and twenty $90 + 200$
- e 9 tens $700 + 200$

4

- a Arrange in a descending order : 652 , 915 , 387 , 572

..... , , ,

- b Complete in the same pattern :

346 , 356 , 366 , , ,

- c Write all number that can be formed from the digits 5 , 3 and 2

..... , , , ,

The greatest number = The smallest number =



Primary 2

1 Choose the correct answer :

(1) The value of 0 in the number 208 is

a 20

b 0

c 10

d 100

(2) The smallest 3 - different - digit number is

a 111

b 100

c 123

d 102

(3) Nine hundred and nine (in digits) :

a 999

b 990

c 919

d 909

(4) 4 tens + 3 hundreds + 5 units =

a 435

b 345

c 534

d 453

(5) The number just before 299 is

a 199

b 298

c 300

d 399

2 Complete the following :

a $875 = \dots + 70 + \dots$

b is 10 more than 247

c The place value of 8 in the number 389 is

d 206 is read as

e 404 , , 606 , , 808 (in the same pattern)

3 Find the result :

$$\begin{array}{r} 59 \\ + 6 \\ \hline \end{array}$$

$$\begin{array}{r} 54 \\ + 38 \\ \hline \end{array}$$

$$45 + 27 = \dots$$

$$87 + 3 = \dots$$

$$24 + 39 + 22 = \dots$$

4 a Arrange the following numbers in an ascending order :

531 , 728 , 439 647

The order is :,,,

b Put the suitable sign (<) , (=) or (>) :

(1) Nine hundred and two $900 + 20$ (2) 7 hundreds , 3 tens and 8 units 738(3) $94 + 600$ $900 + 40 + 6$



Primary 2

1 Choose the correct answer :

(1) Three hundred and seventeen (in letters) :

a 317

b 370

c 307

d 377

(2) The value of 2 in the number 27 is

a 2

b 20

c 200

d 12

(3) $600 + 5 + 40 =$

a 654

b 546

c 645

d 564

(4) 7 hundreds + 20 tens =

a 720

b 702

c 207

d 900

(5) The greatest 3 - different - digit number is

a 999

b 987

c 900

d 102

2 Complete the following :

a The smallest number formed from the digits (3 , 4 and 0) is

b is 10 more than 235 .

c 50 tens = hundreds.

d $905 =$ units + hundreds

e 456 , 466 , 476 , 486 , , (in the same pattern)

3 Find the result :

$456 + 449 =$

732

78

$289 + 78 =$

$+174$

$+78$

$452 + 42 + 106 =$

4 a Arrange the following numbers ascendingly :

428 , 842 , 248 , 482 , 824

The order : , , , ,

b Complete using the suitable sign ((< , = or >)):

[a] 6 hundreds $200 + 400$ [c] 26 tens $200 + 6$ [b] 593 $9 + 50 + 300$ [d] 758 $700 + 85$



Primary 2

1 Choose the correct answer :

(1) The place-value of 9 in the number 396 is

- a** units **b** tens **c** hundreds **d** 90

(2) = 5 hundreds + 2 units

- a** 502 **b** 205 **c** 520 **d** 250

(3) the number just after 989 is

- a** 910 **b** 100 **c** 990 **d** 98

(4) 60 tens = hundreds

- a** 6 **b** 60 **c** 600 **d** 16

(5) $5 + 0 + 3 =$

- a** 503 **b** 53 **c** 35 **d** 8

2 Complete the following :

a $543 + (\dots + 214) = (\dots + 789) + 214$ **b** $125 + 323 = 400 + 40 + \dots$ **c** 7 tens + 5 hundreds + 8 units =**d** $614 = 4 + \dots + 600$ **e** Nine hundred and thirty five = (in digits)

3 Find the result :

$$\begin{array}{r} 277 \\ + 279 \\ \hline \end{array}$$

$$\begin{array}{r} 277 \\ + 279 \\ \hline \end{array}$$

$$\begin{array}{r} 408 \\ + 89 \\ \hline \end{array}$$

$$\begin{array}{r} 408 \\ + 89 \\ \hline \end{array}$$

$$247 + 98 = \dots$$

$$476 + 149 = \dots$$

$$47 + 76 + 48 = \dots$$

4 Complete using the suitable sign ((< , = or >)):

a $535 + 324$ $454 + 424$ **c** 70 tens $300 + 400$ **b** $405 + 203$ $315 + 319$ **d** 314 $300 + 40 + 1$

Arrange in an ascending order : 514 , 501 , 529 , 587 , 563

Name :

On units (1 and 2 up to addition)

Primary 2

20

1 Add :

$$\begin{array}{r} 325 \\ + 256 \\ \hline \end{array}$$

$$\begin{array}{r} 74 \\ + 58 \\ \hline \end{array}$$

$89 + 17 = \dots\dots\dots$

$542 + 258 = \dots\dots\dots$

$300 + 79 = \dots\dots\dots$

2 Choose the correct answer :

[a] The place-value of the digit 9 in 975 is ... [units - tens - hundreds]

[b] The **smallest** 3- different-digit number is [100 - 123 - 102 - 999]

[c] 2 units + 5 hundreds + 6 tens = [265 - 652 - 562 - 256]

[d] $985 = \dots\dots + 80 + 900$ [500 - 5 - 50 - 900]

[e] The number just after 571 is [562 - 572 - 563 - 662]

3 Complete :

[a] The smallest number formed from the digits 8 , 2 and 6 is

[b] $600 = \dots\dots\dots$ tens = hundreds.

[c] $(340 + 138) + 521 = 340 + (138 + \dots\dots\dots)$

[d] The smallest 3-digit number is

[e] 2 hundred , 3 tens and 7 units : the number is
and is read

4 Complete using (<) , (=) or (>) :

[a] $915 \square 9 + 10 + 500$

[b] $527 + 358 \square 647 + 194$

[c] 9 units , 3 tens and 6 hundreds \square 639

Arrange the following numbers in an ascending order :

561 , 375 , 360 , 369 and 506

The order is : , , and

Complete in the same pattern :

346 , 347 , 349 , , ,



Primary 2

1 Choose the correct answer :

(1) Five hundred and sixty = (in digits)

a 605

b 506

c 516

d 560

(2) The greatest number formed the digits (5 , 0 and 3) is

a 503

b 305

c 350

d 530

(3) The value of the digit 5 in the number 235 is

a 5

b units

c 50

d tens

(4) is 100 less than 125

a 25

b 115

c 225

d 135

(5) $500 + 3 =$

a 8

b 53

c 35

d 503

2 Complete the following :

a $200 + 500 =$ = hundredsb $(208 + 447) +$ = $208 + ($ + 551)

c The place-value of 4 in the number 47 is

d $785 = 700 +$ + 5e $234 + 124 = 300 +$

3 Find the result :

$452 + 245 =$

$$\begin{array}{r} 45 \\ - 28 \\ \hline \end{array}$$

$$\begin{array}{r} 72 \\ - 39 \\ \hline \end{array}$$

$$\begin{array}{r} 80 \\ - 5 \\ \hline \end{array}$$

$456 + 44 =$

$$\begin{array}{r} - 28 \\ \hline \end{array}$$

$$\begin{array}{r} - 39 \\ \hline \end{array}$$

$$\begin{array}{r} - 5 \\ \hline \end{array}$$

$89 + 47 =$

4 a Arrange in an ascending order : 405 , 504 , 540 , 540

The order : , , ,

b Complete using the suitable sign ((< , = or))

(1) 5 hundreds + 7 tens $500 + 7$ (2) $600 + 5 + 80$ 658(3) $356 + 483$ $279 + 560$



1

Find the result :

$\begin{array}{r} 26 \\ + 8 \\ \hline \end{array}$	$\begin{array}{r} 34 \\ + 79 \\ \hline \end{array}$	$\begin{array}{r} 458 \\ + 127 \\ \hline \end{array}$	$\begin{array}{r} 42 \\ - 18 \\ \hline \end{array}$	$\begin{array}{r} 72 \\ - 4 \\ \hline \end{array}$	$\begin{array}{r} 52 \\ - 27 \\ \hline \end{array}$
--	---	---	---	--	---

$73 + 27 = \dots\dots\dots$

$80 - 37 = \dots\dots\dots$

$456 + 244 = \dots\dots\dots$

$72 - 29 = \dots\dots\dots$

2

Complete the following :

a $(208 + 447) + \dots\dots\dots = 208 + (\dots\dots\dots + 551)$

b $234 = 30 + \dots\dots\dots + \dots\dots\dots$

c The place-value of 4 in the number 234 is

d 650 is read as

e $752 = \dots\dots\dots$ hundreds + $\dots\dots\dots$ units + $\dots\dots\dots$ tens

3

a Arrange in an ascending order :

450 , 540 , 405 , 504

The order :,,,

b Complete using the suitable sign ((< , = or))

(1) 5 hundreds + 7 tens $500 + 7$

(2) 9 hundreds $300 + 300$

(3) 254 $2 + 50 + 400$



1

Find the result :

$$\begin{array}{r} 198 \\ + 272 \\ \hline \end{array}$$

.....

$$\begin{array}{r} 95 \\ - 47 \\ \hline \end{array}$$

.....

$$142 + 64 = \dots\dots\dots$$

$$91 - 79 = \dots\dots\dots$$

$$400 + 20 + 7 = \dots\dots\dots$$

2

Choose the correct answer :

- a** The place-value of the digit 9 in 975 is ... [units - tens - hundreds]
- b** The **smallest** 3- different-digit number is [100 - 123 - 102 - 999]
- c** 2 units + 5 hundreds + 6 tens = [265 - 652 - 562 - 256]
- d** $985 = \dots\dots\dots + 80 + 900$ [500 - 9 - 90 - 900]
- e** The number just after 571 is [562 - 572 - 563 - 662]

3

Complete :

- a** The **smallest** number formed from 9 , 0 and 2 is
- b** The value of the digit 4 in 245 is
- c** 5 hundreds = tens
- d** $915 + (\dots\dots\dots + 572) = (915 + 500) + 572$
- e** 9 hundred , 5 tens and 7 units : the number is
and is read

4

Complete using the suitable sign ((< , = or >)):

a $915 \quad \square \quad 9 + 10 + 500$

d $283 + 116 \quad \square \quad 344 + 155$

b $520 \quad \square \quad 2 \text{ hundreds} + 5 \text{ tens}$

e $370 + 40 \quad \square \quad 500 - 200$

c Nine hundred and twenty $\square \quad 90 + 200$

Arrange in a descending order : 652 , 915 , 387 , 572



1 Complete the following :

1 1 hundreds + 7 hundreds = hundreds =

2 7 hundreds = tens

3 145 , 146 , 147 , , ,

4 = 9 tens + 1 units + 3 hundreds

5 589 = + + 9

6 Write the place-value of 4 in 640 :

7 The value of 7 in 789 is

8 The greatest 3-digit number is

9 The greatest 3- different -digit number is

10 The greatest that can be formed using 5,3 and 8 is

11 The smallest 3-digit number is

12 The smallest 3- different -digit number is

13 The smallest that can be formed using 7,9 and 0 is

14 9 hundred and 5 units : the number is

and is read

Find the result :

452 + 245 =

$$\begin{array}{r} 277 \\ + 279 \\ \hline \end{array}$$

$$\begin{array}{r} 48 \\ + 9 \\ \hline \end{array}$$

$$\begin{array}{r} 45 \\ - 28 \\ \hline \end{array}$$

456 + 44 =

72 - 29 =

Arrange in an ascending order : 450 , 540 , 405 , 504

The order : , , ,



Primary 2

1 Choose the correct answer :

(1) The closest number to the sum : $(210 + 412)$ is

a 500

b 600

c 700

d 800

(2) $15 \text{ tens} + 2 \text{ hundreds} =$

a 152

b 215

c 350

d 170

(3) $80 + 0 + 4$ 804

a <

b >

c =

(4) The smallest number formed from the digits (5 , 3 and 4) is

a 543

b 345

c 534

d 435

(5) $765 - 432 = 33 +$

a 3

b 30

c 333

d 300

2 Complete the following :

a 650 is read as

b The number just after 359 is

c The value of the digit 8 in the number 287 is

d $752 =$ hundreds + units + tense $957 = 900 +$ + 7

3 Find the result :

$$\begin{array}{r} 45 \\ + 45 \\ \hline \end{array}$$

$$\begin{array}{r} 78 \\ - 29 \\ \hline \end{array}$$

$$\begin{array}{r} 459 \\ + 370 \\ \hline \end{array}$$

$$\begin{array}{r} 237 \\ - 85 \\ \hline \end{array}$$

$$\begin{array}{r} 405 \\ - 378 \\ \hline \end{array}$$

4 Match

Two hundred and fifteen

Six hundred and thirty

 $200 + 50$ $600 + 10 + 3$

2 hundreds + 5 units

250

 $200 + 10 + 5$ $600 + 30$

205

6 hundreds + 1 ten + 3 units



Primary 2

1 Choose the correct answer :

(1) Five hundred and Twelve (in letters) :

a 512

b 502

c 520

d 125

(2) The value of 2 in the number 247 is

a 2

b 20

c 200

d 12

(3) $60 + 500 + 4 =$

a 654

b 546

c 645

d 564

(4) 2 hundreds + 70 tens =

a 720

b 702

c 207

d 900

(5) The smallest 3 - different - digit number is

a 999

b 987

c 900

d 102

2 Complete the following :

a 265 , 275 , 285 , ,

b 900 , 875 , 850 , ,

c $100 = 3 \text{ tens} + \dots \text{ tens}$

d The number just before 751 is

e The greatest 3-digit number formed from (4 and 8) is

3 Find the result :

a $785 + 115 =$ d $782 - 279 =$ b $253 + 58 =$ e $900 - 78 =$ c $120 + 25 + 375 =$

4 a Arrange in a descending order : 800 , 88 , 880 , 888 , 80

The order : , , , ,

b Write all number that can be formed from the digits (3 , 2 and 6)

The numbers are : , , , ,

The greatest number =

The smallest number =

Their sum = + =

The difference = - =



1 Choose the correct answer :

(1) is 100 more than 218

a 318

b 118

c 228

d 208

(2) The place-value of 5 in the number 351 is

a hundreds

b tens

c units

(3) $60 + 500 + 4 =$

a 654

b 546

c 645

d 564

(4) $400 + 300$ 7 hundreds

a <

b >

c =

(5) $765 - 432 = 33 +$

a 3

b 30

c 333

d 300

2 Complete the following :

a $752 =$ hundreds + units + tens

b 900 , 875 , 850 , , (in the same pattern)

c The value of the digit 8 in the number 287 is

d Eight hundred and thirty two : (in digits)

e 752 , 763 , 774 , 785 , (in the same pattern)

3 Find the result :

$$\begin{array}{r} 45 \\ + 45 \\ \hline \end{array}$$

$$\begin{array}{r} 78 \\ - 29 \\ \hline \end{array}$$

$$\begin{array}{r} 459 \\ + 370 \\ \hline \end{array}$$

$$\begin{array}{r} 237 \\ - 85 \\ \hline \end{array}$$

$$\begin{array}{r} 405 \\ - 378 \\ \hline \end{array}$$

4 a Arrange in a descending order : 300 , 33 , 330 , 333 , 30

The order : , , , ,

b Write all number that can be formed from the digits (5 , 1 and 4)

The numbers are : , , , ,

The greatest number =

The smallest number =

Their sum = + =

The difference = - =



Primary 2

1 Choose the correct answer :

(1) The smallest 3 - different - digit number is

a 100

b 102

c 123

d 111

(2) The place-value of 5 in the number 351 is

a hundreds

b tens

c units

(3) 5 hundreds = tens

a 5

b 50

c 500

d 55

(4) is 100 more than 218

a 318

b 118

c 228

d 208

(5) $400 + 300$ 7 hundreds

a <

b >

c =

2 Complete the following :

a $452 + (500 + \dots) = (\dots + 500) + 227$

b 5 tens + 7 hundreds + 2 units =

c $5 + 30 + 800 = \dots$

d Eight hundred and thirty two : (in digits)

e 752 , 763 , 774 , 785 , (in the same pattern)

3 a Find The result :

$528 + 382 = \dots$

$705 - 589 = \dots$

b Complete using (< , = or >)

(1) $452 \square 425$

(2) $525 + 245 \square 982 - 212$

(3) 2 units + 3 tens + 5 hundreds \square 235

4 Mostafa had L.E. 784 He bought a bicycle for L.E. 389

How much money remained with Mostafa ?

The remaining money = = L.E.

In my school , the number of boys is 320 and girls is 400

How many pupils in my school ?

Number of pupils = + = pupils



Primary 2

1 Choose the correct answer :

(1) The value of 1 in the number 215 is

a 0

b 1

c 10

d 100

(2) 4 tens + 3 hundreds + 5 units =

a 435

b 534

c 345

d 534

(3) $300 + 4 + 0 =$

a 340

b 700

c 430

d 304

(4) The smallest 3 - same - digit number is

a 100

b 102

c 111

d 123

(5) $800 - 50 =$

a 750

b 850

c 745

d 855

2 Complete the following :

a + 258 = 718

d $750 + \dots = 214 + 750$ b $541 + \dots = 984$

e 6 tens + 2 tens = tens

c 123 , 134 , 145 , 156 , ,

3 Find the result :

$$\begin{array}{r} 456 \\ + 189 \\ \hline \end{array} \quad \begin{array}{r} 940 \\ - 137 \\ \hline \end{array}$$

Complete:

$$\begin{array}{r} 5 \square 6 \\ + 42\square \\ \hline 950 \end{array}$$

$$\begin{array}{r} \square 23 \\ + 417 \\ \hline 6\square\square \end{array}$$

4 a Arrange in a descending order :

705 , 750 , 785 , 758 , 770

The order : , , , ,

b Mohand bought a T-shirt for LE 240 and a toy for LE 107. If he had LE 877.

Find the remaining money with him.

He paid =

The remainder =



Primary 2

1 Choose the correct answer :

(1) The value of 2 in the number 27 is

a 2

b 20

c 200

d 12

(2) is 100 less than 125

a 25

b 115

c 225

d 135

(3) 5 hundreds = tens

a 5

b 50

c 500

d 55

(4) The value of 1 in the number 215 is

a 0

b 1

c 10

d 100

(5) Five hundred and Twelve :

a 512

b 502

c 520

d 125

2 Complete the following :

a $905 = \dots \text{ units} + \dots \text{ hundreds}$ b $\dots - 245 = 454$ c $817 - \dots = 227$ d $552 + (118 + \dots) = (\dots + 118) + 228$ e $125 = \dots \text{ units} + \dots \text{ tens} + \dots \text{ hundreds}$

3 Find the result :

$$\begin{array}{r} 187 \\ + 173 \\ \hline \end{array}$$

$$\begin{array}{r} 891 \\ - 403 \\ \hline \end{array}$$

Complete:

$$\begin{array}{r} 946 \\ - \boxed{}1\boxed{} \\ \hline 430 \end{array}$$

$$\begin{array}{r} \boxed{}86 \\ - 142 \\ \hline 1\boxed{}\boxed{} \end{array}$$

4 Arrange in an ascending order :

452 , 325 , 845 , 128 , 514

The order :,,,,

Marwa had LE 845 , she spent LE 455 . Find the remaining money with her .

The remainder = - =

Name :

On units (1 and 2)

Primary 2

20

1 Choose the correct answer :

(1) Two hundred and eight = (in digits)

- a** 268 **b** 286 **c** 260 **d** 208

(2) The smallest number formed from 3 , 5 and 0 is

- a** 530 **b** 350 **c** 305 **d** 503

(3) The smallest 3- digit number is

- a** 100 **b** 123 **c** 102 **d** 111

(4) The value of 5 in 531 is

- a** 5 **b** 50 **c** 500 **d** 55

(5) $5 + 0 + 2 =$

- a** 52 **b** 502 **c** 522 **d** 7

2 Complete the following :

a + (927 + 658) = (772 + 927) + 658

b 534 = hundreds + units + tens

c The place - value of 8 in 825 is

d $234 + 676 =$ + 234

e $624 = 600 + 20 +$

3 Find the result :

$$\begin{array}{r} 578 \\ + 122 \\ \hline \end{array}$$

$$\begin{array}{r} 809 \\ - 788 \\ \hline \end{array}$$

$$658 + 285 =$$

$$400 + 20 + 7 =$$

$$900 - 753 =$$

4 Arrange in a descending order :

505 , 50 , 500 , 555 , 550

..... , , , ,

Hoda had LE 800 , bought a toy for LE 135 , and a T-shirt for 345 , find the remaining money with her .




She paid = + = LE

the remainder = - = LE



Primary 2

1 Choose the correct answer :

- (1) The name of the figure  is a
 a line segment b Straightline c open curve d Ray
- (2) The number of line segment formed the figure is
 a 4 b 5 c 6 d 7 
- (3) The value of 5 in the number 435 is
 a 5 b 15 c 50 d 500
- (4) The greatest 3 - different - digit number is
 a 999 b 900 c 998 d 987
- (5) The name of the figure  is a
 a line segment b Straightline c open curve d Ray

2 Complete the following :

- a Three hundred and sixt one : (in digits)
- b $400 + 20 + 3 =$
- c + 247 = 800
- d 364 , 374 , 384 , ,
- e The place-value of 7 in the number 375 is

3 Find the result :

$$\begin{array}{r} 459 \\ + 370 \\ \hline \end{array}$$

$$\begin{array}{r} 405 \\ - 378 \\ \hline \end{array}$$

$785 + 115 =$

$253 + 58 =$

$120 + 25 + 375 =$

4 Write all numbers that can be formed from the digits (5 , 4 and 3) :

..... , , , , ,

The greatest number is : The smallest number is :

Eman has LE 247 and Mazen has LE 353 . How much money did they have altogethr .

They have = + = LE



Primary 2

1 Choose the correct answer :

(1) 2 hundrds + 2 units =

a 202

b 220

c 222

d 212


(2) The greatest 3-digit number is

a 999

b 987

c 900

d 100

(3) The starting point of the ray  is

a A

b B

c C

d D

(4) The name of the figure  is a

a line segment

b Straigth line

c open curve

d Ray

(5) The name of the figure  is a

a line segment

b Straigth line

c open curve

d Ray

2 Complete the following :

a 214 is read as

b The place-value of 3 in the number 38 is

c $5 + 70 + 300 =$ d $125 +$ = 735

e 742 , 732 , 722 , 712 , ,

3 a Find the result :

$253 - 58 =$

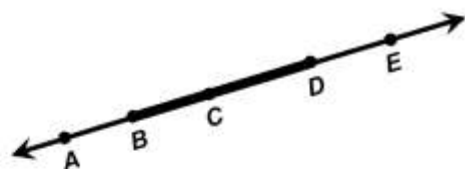
$785 + 115 =$

b Complete using " on " or " not on "

The point A is line segment BD

The point C is line segment BD

The point E is line segment BD

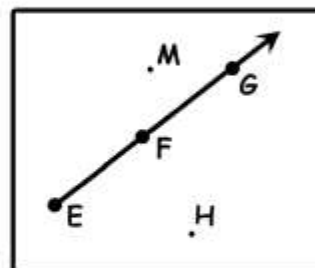


4 a Using the opposite figure to complete:

(1) The starting point ray is

(2) The points on the ray are

(3) The points outside the ray are



b Soha has L.E. 385 and her brother Omar has L.E. 567

How much money do they have together ?

They have = + = L.E.



Primary 2

20

1 Choose the correct answer :

(1) The number of line segments in the shape  is

a 4

b 5

c 6

d 7

(2) The figure  is congruent to the figurea b c d 

(3) The straight line has end points

a 0

b 1

c 2

d 3

(4) The value of 8 in the number 82 is

a tens

b units

c 8

d 80

(5) 2 units + 3 tens + 6 hundreds =

a 236

b 632

c 263

d 326

2 Complete the following :

a Three hundred and thirty two : (in digits)

b The greatest number formed from (3 , 8 and 1) is

c $500 - \dots = 425$

d 256 , 276 , 296 ,

e $456 + (\dots + 989) = (456 + 122) + \dots$ 3 a Find the result : $531 + 249 = \dots$ $909 - 245 = \dots$

b Write the number of the line segments that are there in each of the following shapes :

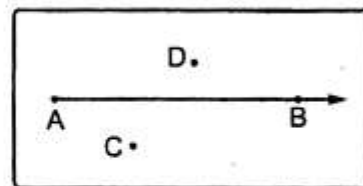


4 a From the opposite figure , complete :

(1) The point is the starting point of the ray.

(2) The points and lie on the ray.

(3) The points and lie outside the ray.



b Mazen bought a suit for 399 pounds and a shirt for 160 pounds. If he had 590 pounds. How much money was left with him ?

The price of the suit and the shirt = + = pounds.

The left money = - = pounds.



1 Choose the correct answer :

(1) The number of line segments in the shape  is

- a 4 b 5 c 6 d 7

(2) The figure  is congruent to the figure

- a  b  c  d 

(3) The line segments has end points

- a 0 b 1 c 2 d 3

(4) The value of 6 in the number 86 is

- a tens b units c 6 d 60

(5) 2 tens + 3 units + 6 hundreds =

- a 236 b 632 c 263 d 623

2 Complete the following :

- a Three hundred and thirty : (in digits)
 b The greatest number formed from (0 , 8 and 1) is
 c $556 - \dots = 422$
 d 256 , 266 , 276 ,
 e $656 + (\dots + 900) = (656 + 626) + \dots$

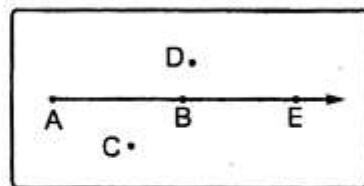
3 a Find the result : $394 + 127 = \dots$ $702 - 581 = \dots$

b Write the number of the line segments that are there in each of the following shapes :



4 a From the opposite figure , complete :

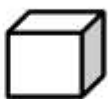






- (1) The point is the **starting point** of the ray.
 (2) The points and lie **on** the ray.
 (3) The points and lie **outside** the ray.



b Mazen bought a suit for 272 pounds and a shirt for 128 pounds. If he had 800 pounds. How much money was left with him ?

The price of the suit and the shirt = + = pounds.

The left money = - = pounds.

Solid							
Name
Number of edges
Number of vertices
Number of faces
Type of each face	
Number of bases		
Type of each base			



1 Choose the correct answer :

(1) 5 hundreds = tens

a 5

b 50

c 500

d 15

(2) The number just after 349 is

a 348

b 359

c 339

d 350

(3) $2 + 0 + 4 =$

a 204

b 6

c 402

d 24

(4) The number of faces of the cuboid is

a 6

b 5

c 4

d 3

(5) The solid which all faces are squares is

a Cube

b Cuboid

c Sphere

d Prism

2 Complete the following :

a The value of the circled digit in the number (3) 75 is

b The number of edges of the cube is

c The smallest number formed from 5 , 0 and 2 is

d The name of the solid that has 2 circular bases is

e The number 572 is read as

3 Find the result :

$$\begin{array}{r} 45 \\ + 45 \\ \hline \end{array}$$

$$\begin{array}{r} 78 \\ - 29 \\ \hline \end{array}$$

$$\begin{array}{r} 459 \\ + 370 \\ \hline \end{array}$$

$$\begin{array}{r} 237 \\ - 85 \\ \hline \end{array}$$

$$\begin{array}{r} 405 \\ - 378 \\ \hline \end{array}$$

4 a Put (<) , (=) or (>) :

(1) $216 - 117$ 100

(2) $124 + 685$ 8 hundreds + 9 units

b A grocer has 325 kg. of sugar. In the first week , he sold 136 kg. and in the second week he sold 84 kg. How much sugar was left ?

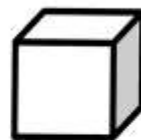
(1) The grocer sold = = kg.

(2) The left sugar = = kg.




In the opposite figure , complete :

- (1) The solid is called
 (2) The number of vertices (3) The number of edges
 (4) The number of faces The shape of each face



In the opposite figure , complete :

- (1) The solid is called
 (2) The number of vertices (3) The number of edges
 (4) The number of faces The shape of each face




In the opposite figure , complete :

- (1) The solid is called
 (2) The number of vertices
 (3) The number of bases The shape of each bases



In the opposite figure , complete :

- (1) The solid is called
 (2) The number of bases
 (3) The shape of each bases



In the opposite figure , complete :

- (1) The solid is called
 (2) The number of vertices
 (3) The number of edges
 (4) The number of faces The shape of each face
 (5) The number of bases The shape of each bases



In the opposite figure , complete :

- (1) The solid is called
 (2) The number of vertices
 (3) The number of edges
 (4) The number of faces The shape of each face
 (5) The number of bases The shape of each bases





Primary 2

1 Choose the correct answer :

(1) The height of the classroom can be metres.

a 1

b 3

c 10

d 70

(2) The length of your pencil can be

a 10 cm.

b 15 m.

c 10 m.

d 50 m.

(3) The greatest 3-digit number is

a 987

b 999

c 899

d 900

(4) The value of the digit 7 digit in the number 732 is

a 700

b 70

c 7

d 77

(5) 5 metres = centimetres.

a 500

b 50

c 5

d 55

2 Complete the following :


a metres = 300 centimetres.

b 2 yards = cm.

c 370 centimetres = metres and centimetres.

d 8 metres and 9 centimetres = + = cm

e Name each of the following figures :



.....



.....



.....



.....

3 Find the result :

$$\begin{array}{r} 542 \\ + 319 \\ \hline \end{array}$$

.....

$$\begin{array}{r} 400 \\ - 352 \\ \hline \end{array}$$

.....

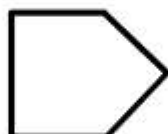
$$\begin{array}{r} 983 \\ - 621 \\ \hline \end{array}$$

.....


$$\begin{array}{r} 631 \\ + 124 \\ \hline \end{array}$$

.....

4 a Write the number of the line segments that are there in each of the following shapes :



.....



.....




.....

b If the number of the pupils in a primary school is 643 and the number of boys is 257 Find the number of girls.

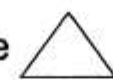
The number of girls = - = girls.




1 Complete each of the following :

- [a] 4 units , 6 tens , 3 hundreds is written in digits as
 [b] 417 , 427 , 437 , (in the same pattern)
 [c] The cube has edges.
 [d] The greatest number formed from the digits 6 , 2 , 5 is
 [e] The figure  is called [f] 5 m , 43 cm = cm

2 Choose the correct answer from those between the brackets :

- [a] The value of the digit 4 in the number 564 is (4 or 40 or 400)
 [b] $261 + 100$ $261 - 100$ (< or > or =)
 [c] 426 centimetres = metres , 26 centimetres. (4 or 40 or 400)
 [d] The smallest number formed from the digits 5 , 2 , 7 is (257 or 752 or 275)
 [e] $364 + 236$ 6 hundreds. (< or > or =)
 [f] The number of the sides of the figure  = sides. (2 or 3 or 4)

3 Choose the correct answer from the column (B) to the suitable one of the column (A) :

(A)	(B)
[a] The number just after the number 573 is	• 6
[b] $425 = 5 + 20 + \dots$	• 500
[c] The place value of the digit 6 in the number 613 is	• tens
[d] 5 metres = centimetres.	• 574
[e] The solid  is called	• sphere
[f] The cuboid has faces.	• hundreds
	• 400

4 [a] Find the result of each of the following :

(1) $827 + 85 = \dots$ (2) $837 - 379 = \dots$ (3) $267 + 533 = \dots$

[b] **Arrange in an ascending order :** 419 , 149 , 914 and 941

The order is : and

5 [a] Asmaa bought a group of toys for L.E. 224 and a mobile for L.E. 635

How much money did Asmaa pay ?

Asmaa paid = + = L.E.

[b] **Write the name of each of the following :**






1 Complete each of the following :

- [a] The value of the digit 6 in the number 612 is
- [b] The number 297 = units , tens , hundreds.
- [c] 514 centimetres = metres , centimetres.
- [d] The solid which all its faces are squares is
- [e] The greatest number formed from the digits 4 , 1 , 8 is
- [f] The figure \longleftrightarrow is called

2 Compare using (< , > or =) :

- [a] 475 410 + 35 [b] 9 hundreds , 6 units 9 + 600
- [c] number of the faces of the cube number of the edges of the cuboid.
- [d] 3 metres , 43 centimetres 433 centimetres.
- [e] 372 - 272 one hundred.
- [f] The length of a pencil the length of a school book.

3 Choos from the column (B) to the suitable one of the column (A) :

(A)	(B)
[a] The place value of the digit 3 in the number 327 is	• 987
[b] The solid which has two circular bases is	• tens
[c] 5 + 30 + 600 =	• hundreds
[d] The number just before the number 988 is	• 999
[e] The figure  has sides.	• cylinder
[f] The greatest number formed from 3 digits is	• 635
	• 6

4 [a] Find the result of each of the following :

- (1) 462 + 452 = (2) 730 - 616 = (3) 875 + 64 =

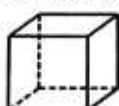
[b] Complete in the same pattern :

200 , 215 , 230 , , ,
and the greatest of these numbers is

**5 [a] Sahar had 245 pounds , her father gave her 315 pounds.
How much money with Sahar ?**


What Sahar has = + = pounds.

[b] Write the name of each solid of each of the following :








1 Complete each of the following :

- [a] 9 units , 6 tens , 4 hundreds is written in digits as
- [b] The cube has faces.
- [c] 5 metres = centimetres. [d] $467 = 7 + \dots + 400$
- [e] 417 , 427 , , , 457 , (in the same pattern)
- [f] The shape  is called

2 Choose the correct answer from those between the brackets :

- [a] greatest number formed from the digits 3 , 8 , 5 is (583 or 538 or 853)
- [b] The place value of 6 in the number 654 is (units or tens or hundreds)
- [c] The shape  represents (straight line or closed curve or open curve)
- [d] 584 centimetres 74 centimetres + 5 metres (< or > or =)
- [e] $451 + 216$ 667 (< or > or =)
- [f] The number 690 is more than the number 490 by (2 or 20 or 200)

3 Choose the correct answer from the column (B) to the suitable one of the column (A) :

(A)	(B)
[a] The value of the digit 3 in the number 537 is	• cylinder
[b] The solid  is called	• the length
[c] The number 579 is just before the number	• 30
[d] The centimetre and the metre are used for measuring	• 100
[e] The smallest 3 digit number is	• 580
[f] The shape  is called	• ray

4 [a] Find the result (1) $267 + 533 = \dots$

(2) $271 - 184 = \dots$

(3) $653 - 97 = \dots$

[b] Arrange the following numbers in a descending order :

564 , 535 , 581 , 560 and 549

The order is : , , and

5 [a] Hani bought a suit for 640 pounds and a pair of shoes for 235 pounds. How much money did Hani pay ?



Hani paid = + = pounds.

[b] Write the name

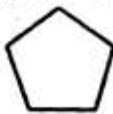




1 Choose the correct answer from those between the brackets

- [a] The shape  represents (open curve or closed curve or straight line)
- [b] 6 metres + 7 centimetres = cm. (706 or 607 or 670)
- [c] The number of vertices of the square the number of faces of the cube. (> or < or =)
- [d] The place value of 3 in 341 is (units or tens or hundreds)
- [e] $217 - 217$ $217 - 0$ (> or < or =)
- [f] The shape  represents (straight line or line segment or ray)

2 Complete each of the following :

- [a] 800 , 700 , 600 , (in the same pattern)
- [b] The value of the digit 5 in the number 651 is
- [c] The smallest number formed from the digits 2 , 4 , 1 is
- [d] The number of line segments in the polygon  =
- [e] $23 + (117 + 200) = (23 + 117) +$
- [f] The number of edges of the cuboid =

3 Choose from the column (B) to the suitable one of the column (A) :


(A)	(B)
[a] The greatest number formed from 3 digits =	• 990
[b] 9 hundreds + 9 tens =	• 701
[c] $605 >$	• 999
[d] $701 + 83 = 83 +$	• circle
[e] 6 m. + 50 cm. = cm.	• 506
[f] The base of the cone is in the form of a	• rectangle
	• 650

4 [a] Find the result $444 + 488 =$ $920 - 119 =$

[b] Arrange in a descending order : 754 , 659 , 694 , 69 and 729

The descending order : , , and

5 [a] Write the name of each of the following :

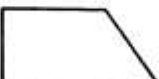


[b] If the number of pupils in one of the primary schools is 745 , 418 of them are boys. How many girls are there ?


Number of girls = - = girls.



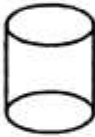

1 Choose the correct answer

- [a] The place value of 3 in 356 is (units or tens or hundreds)
 [b] $756 - 106 = \dots\dots\dots$ (600 or 650 or 750)
 [c] 6 hundreds 60 tens. (< or > or =)
 [d] 5 hundreds , 4 tens , 6 units = (645 or 546 or 564)
 [e] Number of vertices of the cube = (6 or 8 or 12)
 [f] Number of sides of the polygon  = (3 or 4 or 5)

2 Complete each of the following :

- [a] The greatest 3-digit number is [c] $127 + 64 = 64 + \dots\dots\dots$
 [b] The shape  is called [d] $852 = 800 + 2 + \dots\dots\dots$
 [e] 3 metres + 20 centimetres = centimetres.
 [f] 432 , 533 , 634 , (in the same pattern)

3 Choose from the column (B) to the suitable one of the column (A) :

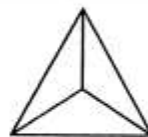
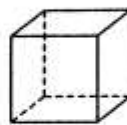
(A)	(B)
[a] The solid  is called	• 606
[b] The base of the cone is in the form of a	• cylinder
[c]  is called	• 660
[d] $6\text{ m.} + 6\text{ cm.} = \dots\dots\dots\text{ cm.}$	• circle
[e] The number just after 659 is	• open curve
[f] $600 > \dots\dots\dots$	• 559
	• 700

- 4** [a] Find the result (1) $654 + 46 = \dots\dots\dots$ (2) $941 - 165 = \dots\dots\dots$

[b] Arrange in an ascending order : 56 , 538 , 138 , 380 and 338

The order is : , , , and

5 [a] Write the number of edges



.....

[b] The number of pupils in a primary school is 472 , 238 pupils of them participated in a trip to the pyramids. How many pupils are not going ?


The number of pupils = - =



1 Choose the correct answer :

- [a] Seven hundred and forty = (714 or 740 or 704)
- [b] The place value of 5 in 563 is (tens or hundreds or units)
- [c] The smallest 3-digit number is (100 or 999 or 102)
- [d] The value of 7 in the number 673 is (70 or 7 or 700)
- [e] 9 metres 7 metres (< or > or =)
- [f] 700 cm. = metres. (700 or 7 or 70)

2 Complete the following :

- [a] The greatest number formed from 9 , 5 and 8 is
- [b] 5 metres = cm. [c] The shape  is called
- [d] $975 = \dots + \dots + \dots$
- [e] $(165 + 760) + 542 = 165 + (760 + \dots)$
- [f] The number 864 = units , tens , hundreds

3 [a] Arrange in a descending order : 765 , 132 , 865 and 742

The order is : , , and

- [b] Ahmed saved 420 pounds in a month and the next month he saved 350 pounds. How much money did he save ?

He saved = + = pounds.

4 Find the result of :

$$\begin{array}{r} 897 \\ - 342 \\ \hline \end{array}$$

$$\begin{array}{r} 543 \\ + 412 \\ \hline \end{array}$$

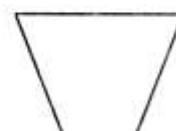
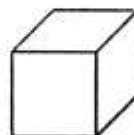
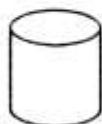
$$\begin{array}{r} 865 \\ + 127 \\ \hline \end{array}$$

$$\begin{array}{r} 654 \\ + 323 \\ \hline \end{array}$$

$$\begin{array}{r} 763 \\ - 248 \\ \hline \end{array}$$

$$\begin{array}{r} 905 \\ - 349 \\ \hline \end{array}$$

5 Join each of the following by its name :



Cylinder

Cone

Cube

Line segment


Open curve

Polygon



1 Complete :


[a] Eight hundred and eighty-eight = $800 + 8 + \dots$

[b] The number of sides of the figure  is \dots

[c] The place value of 6 in 567 is \dots

[d] The number just before 590 is \dots

[e] 627 piastres = \dots pounds + \dots piastres


[f] The name of the solid  is \dots

2 Choose the correct answer :

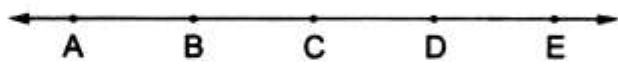
[a] 426 centimetres = \dots metres , 26 centimetres. (4 or 40 or 400)

[b] The number 690 is more than the number 490 by \dots (2 or 20 or 200)

[c] The closest number to the result of $294 + 466$ is \dots
(600 or 700 or 800 or 900)

[d] The shape  represents \dots (open curve or straight line or closed curve)

[e] The number of edges of the cuboid is \dots (6 or 8 or 12 or 20)

[f] The ray that starts at C and passes 
through D is passing also through \dots (A or B or E)

3 [a] Complete : 287 , 290 , 293 , 296 , \dots , \dots , 305 , \dots

[b] Arrange in an ascending order : 564 , 581 , 702 , 539 and 621

The order is : \dots , \dots , \dots , \dots and \dots

**[c] Mariam has 900 pounds. If she bought a mobile for 325 pounds.
How much money left with her ?**

The money left = \dots = \dots pounds.

4 Choose the correct answer from the column B to the suitable one of column A :

(A)	(B)
[a] The number 9 hundreds + 9 units = \dots	• 99
[b] The greatest 3-digit number = \dots	• 909
[c] $100 - 1 = \dots$	• 990
[d] 9 metres + 90 centimetres = \dots centimetres.	• 999

5 Complete using (< , > or =) :



[a] $716 - 617$  one hundred

[b] 6 hundreds  50 tens



[c] The number of vertices of a square  The number of faces of the cube



1 Choose the correct answer :

- (1) The value of 5 in the number 536 is (50 or 5 or 500)
- (2) $475 \square 457$ ($>$ or $<$ or $=$)
- (3) The number 690 is more than the number 590 by (1 or 10 or 100)
- (4) The greatest 3-different digit number is (999 or 987 or 897)
- (5) The shape  represents (open curve or closed curve or straight line)
- (6) 3 units , 5 tens , 2 hundreds in digits as (235 or 253 or 352 or 532)
- (7) 20 tens = hundreds. (2 or 20 or 200)
- (8) This shape  represents (straight line or line segment or ray)
- (9) The cube has faces. (6 or 8 or 10)
- (10) The place value of 7 in 745 is (units or tens or hundreds)

2 Complete each of the following :

- (11) The number of line segments in the polygon  =
- (12) The number of edges of the cuboid =
- (13) $(123 + 224) + 326 = 123 + (\dots + \dots)$
- (14) $853 = \dots + 50 + \dots$ (15) The number 493 comes after
- (16) 7 pounds = piastres. (17) $138 + 72 = 72 + \dots$
- (18) The base of cone is in the form of 
- (19) The greatest number formed from the digits 7 , 3 and 5 is
- (20) 310 , 320 , 330 , , , (in the same pattern)

3 Find the result of each of the following :

(21) $\begin{array}{r} 163 \\ + 642 \\ \hline \end{array}$	(22) $\begin{array}{r} 562 \\ + 249 \\ \hline \end{array}$	(23) $\begin{array}{r} 844 \\ - 123 \\ \hline \end{array}$	(24) $\begin{array}{r} 783 \\ - 495 \\ \hline \end{array}$
--	--	--	--

4 Compare using ($<$, $>$ or $=$) :

- (25) $372 - 272 \square$ one hundred. (26) The length of a pencil \square the length of a door.

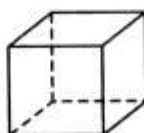
(27) Ali bought a suit for 550 pounds and a pair of shoes for 340 pounds.
Ali paid = + = pounds.

(28) Write the numbers between 311 and 318

(29) Arrange in an ascending order : 211 , 380 , 247 and 292


The order is :

(30) Write the name





1 Complete :

- [a] The value of the digit 5 in number 254 is
- [b] The greatest 3-different digit number is
- [c] 9 metres and 15 centimetres = centimetres.
- [d] The number of vertices of the cuboid =
- [e] The shape  represents
- [f] $(115 + 524) + \dots = 115 + (524 + 205)$

2 Choose the correct answer :

- [a] The smallest 3-digit number is (100 or 902 or 123)
- [b] The has one vertex and one circular base. (cube or cone or sphere)
- [c] $400 + 50 + 8 = \dots$ (540 or 458 or 754)
- [d] The place value of 3 in number 370 is (units or tens or hundreds)
- [e] The number that comes after 399 is (400 or 499 or 390)
- [f] Seven hundred and forty-one = (417 or 741 or 147)

3 [a] Arrange in ascending order : 690 , 208 , 862 and 436

The order is : , , and

[b] Put the suitable sign (< , > or =) :

- (1) 6 hundreds + 5 tens + 3 units $400 + 72$
- (2) 9 hundreds 90 tens (3) $524 + 145$ $830 - 430$
- (4) 306 centimetres 5 metres and 15 centimetres.

4 [a] Find the result :

$351 + 213 = \dots$

$$\begin{array}{r} 413 \\ + 329 \\ \hline \end{array}$$

$$\begin{array}{r} 765 \\ - 418 \\ \hline \end{array}$$

$$\begin{array}{r} 705 \\ - 85 \\ \hline \end{array}$$

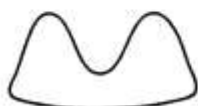
[b] Amr had L.E. 514 and he bought a shirt for L.E. 243

How much money remained with him ?

The remained = - = L.E.

**5 [a] Complete in the same pattern : (1) 743 , 753 , ,
(2) 816 , 616 , ,**

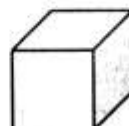
[b] Write the name of the figure :



(1)



(2)






(3)





1 Choose the correct answer :

- (1) The value of the digit 6 in 654 is (6 or 60 or 600)
- (2) $320 \square 500 - 300$ (= or < or >)
- (3) Number of sides of this shape  = (4 or 5 or 6)
- (4) The shape \longrightarrow represents (straight line or line segment or ray)
- (5) The smallest 3-digit number is (100 or 102 or 111)
- (6) The has one vertex and one circular base. (cone or cylinder or cube)
- (7) The number that comes after 399 is (400 or 499 or 398)
- (8) 6 hundreds 60 tens. (> or = or <)
- (9) 6 metres + 7 centimetres = centimetres. (706 or 607 or 670)
- (10) The shape  represents (straight line or closed curve or open curve)
- (11) The place value of the digit 8 in 978 is (units or tens or hundreds)
- (12) The opposite figure is called  (cone or sphere or cube)
- (13) 3 units, 6 hundreds, 2 tens is written as (263 or 623 or 362)
- (14) $470 - 370 =$ (1 or 10 or 100)
- (15) The cube has vertices. (6 or 8 or 12)

2 Complete the following :

- (1) The number 297 = units , tens , hundreds.
- (2) Number of faces of cuboid is
- (3) The solid which all of its faces are squares is
- (4) $425 = 5 + 20 +$
- (5) 417 , 427 , , 447 , (in the same pattern)
- (6) $756 - 107 =$
- (7) $127 + 64 = 64 +$
- (8) The greatest number formed from 3 , 8 and 2 is
- (9) The base of the cylinder is in the shape of

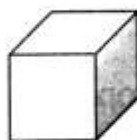
3 Answer the following :

- (1) Maha had 245 pounds. Her father gave her 314 pounds.
How much money with Maha ?
What Maha has = + = pounds.

(2) Arrange in an ascending order : 419 , 149 , 914 and 941

The order is : , and

(3) Join :



Straight line

Cube

Pyramid

Cylinder

1 Complete the following :

[a] The greatest 3-different digit number are

[b] The place value of the digit 6 in the number 620 is

[c] $125 + \dots = 365 + 125$ [d] $406 = \dots + \dots$

[e] 523 , 533 , 543 , , (in the same pattern)

2 Find the result :

$$\begin{array}{r} 671 \\ + 232 \\ \hline \end{array}$$

$$\begin{array}{r} 807 \\ - 243 \\ \hline \end{array}$$

$$\begin{array}{r} 710 \\ + 156 \\ \hline \end{array}$$

$$\begin{array}{r} 910 \\ - 300 \\ \hline \end{array}$$

3 Choose the correct answer :

[a] The base of the cone is in the shape of (circle or square or triangle)

[b] 20 tens = hundreds (2 or 20 or 200)

[c] 600 cm. = m. (6 or 60 or 600)

[d] The solid which all the faces are rectangles is (cuboid or cube or cylinder)

[e] $5 + 0 + 3 = \dots$ (503 or 8 or 53)

4 Put (< , > or =) :

[a] $806 \square 860$

[c] $325 \square 300 + 25$

[b] $5 \text{ m. } \square 20 \text{ cm.}$

[d] $900 + 2 \square 900 - 2$

[e] The number of faces of cube \square The number of faces of cuboid

5 [a] Arrange in an ascending order : 523 , 203 and 620

The order is : , and

[b] Join :



Cylinder

Straight line



1 Complete each of the following :

[a] The greatest 3-different digit number is

[b] This figure  is called

[c] The place value of (8) in 382 is

[d] 310 , 320 , , (in the same pattern)

[e] 509 (in words) =

[f] Each face of the cube is a

2 [a] Find the result :

$$\begin{array}{r} 735 \\ - 298 \\ \hline \end{array}$$

$$\begin{array}{r} 345 \\ + 299 \\ \hline \end{array}$$

[b] Ahmed had 700 pounds. He bought a toy for 254 pounds.

How much money was left with him ?

The remainder = - = pounds.

3 [a] Join each of the following to its name :



Closed curve

Cube

Straight line

Rectangle


[b] Arrange in an ascending order : 805 , 250 , 739 and 290

The orders is : , and

4 [a] Put (< , > or =) : (1) 450 405

(2) 240 Two hundred and fourteen (3) 405 + 253 658

[b] How many line segments are there in each figure ?



.....



.....



.....

5 Choose the correct answer :

[a] The cylinder has 2 bases in the form of (circle or square or triangle)

[b] The smallest number formed from 3 , 9 and 1 is (391 or 931 or 139)

[c] The value of (5) in 458 is (5 or 50 or 500)

[d] 5 m and 80 cm = cm. (580 or 508 or 58)

[e] Four hundred and twenty = (420 or 240 or 402)

[f] 5 hundreds , 3 units = (350 or 503 or 530)



1 Complete :

- [a] The value of 5 in 534 is
- [b] The greatest 3-digit number is
- [c] The figure \longrightarrow is called
- [d] The cube has faces.
- [e] 237 cm. = m. , cm.
- [f] The smallest number formed from 5 , 2 and 8 is

2 Complete :

[a]
$$\begin{array}{r} 537 \\ + 185 \\ \hline \end{array}$$

[b]
$$\begin{array}{r} 365 \\ - 157 \\ \hline \end{array}$$

- [c] $127 + 813 = 813 + \dots$
- [d] $300 + 60 + 5 = \dots$
- [e] 225 , 235 , 245 , , (in the same pattern)

3 Put (< , > or =) :

[a] $523 \square 325$

[c] $621 + 138 \square 621 - 138$

[b] $500 \square 50 \text{ tens}$

[d] $6 \text{ m. } \square 6 \text{ cm.}$

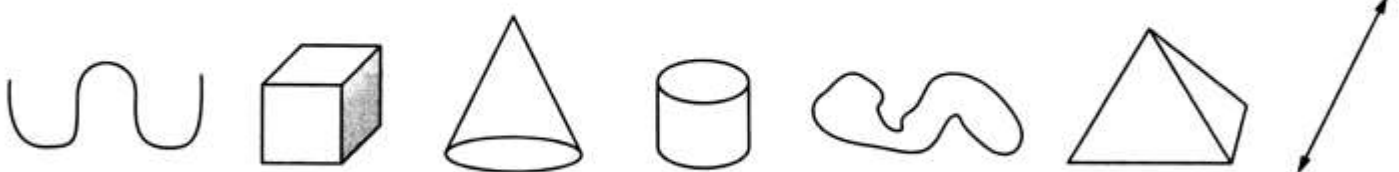
4 [a] Arrange in an ascending order : 527 , 384 , 425 and 600

The order is : , , and

[b] If the number of boys in a primary school is 418 and the number of girls is 213 Find the total number of students in the school.

The total = + =

5 Match :



Cube

Cone

Open curve

Closed Curve

Cylinder

Straight Line

Pyramid




1 Choose the correct answer :

- [a] The greatest number formed from the digits 3 , 5 and 8 is
(538 or 853 or 385)
- [b] 5 metres + 32 centimetres = cm. (325 or 523 or 532)
- [c] The number of edges of the cuboid = (4 or 12 or 8)
- [d] The place value of 4 in 548 is (units or tens or hundreds)
- [e] $864 = \dots + 60 + 4$ (8 or 80 or 800)
- [f] 7 hundreds , 2 tens , 3 units = (723 or 327 or 272)

2 Complete of the following :

[a] $217 + 65 = \dots + 217$

[b] $857 - \dots = 357$

[c] The number of sides of the polygon  =

[d] The number of vertices of the cube =

[e] 514 centimetres = metres , centimetres.

[f] 200 , 300 , 400 , , (in the same pattern)

3 [a] Find the result :

(1)
$$\begin{array}{r} 405 \\ + 132 \\ \hline \end{array}$$

(2)
$$\begin{array}{r} 392 \\ + 325 \\ \hline \end{array}$$

(3)
$$\begin{array}{r} 673 \\ - 123 \\ \hline \end{array}$$

(4)
$$\begin{array}{r} 794 \\ - 357 \\ \hline \end{array}$$

[b] Ahmed bought a book for P.T. 350 and a pen for P.T. 225
How much money did he pay ?
Ahmed paid = - =

4 [a] Arrange in a descending order : 94 , 854 , 867 and 235

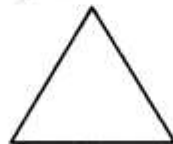

The order is : , , and

[b] Put (< , > or =) :

(1) $475 \square 410 + 65$

(2) $784 \text{ cm. } \square 4 \text{ m. } + 78 \text{ cm.}$

5 Join each figure to its name :



Rectangle

Cube

Ray

Triangle

Cylinder

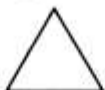

Straight Line




1 Complete each of the following :

- [a] 3 units , 4 tens , 7 hundreds is written in digits as
- [b] 100 , 200 , 300 , , (in the same pattern)
- [c] the cube has faces. [d] The shape \longrightarrow is called
- [e] The greatest number formed from the digits 4 , 1 and 9 is
- [f] 612 centimetres = metres , centimetres.

2 Compare using (< , > or =) :

- [a] 264 $200 + 3$
- [b] The number of the faces of the cube the number of the edges of the cuboid.
- [c] $358 + 100$ $358 - 100$ [d] 7 hundreds , 4 units 704
- [e] 6 metres , 24 centimetres 536 centimetres
- [f] The number of sides of  the number of sides of 

3 Choose the correct answer :

- [a] The number just after the number 573 is (400 or 574 or 600)
- [b] $425 = 5 + 20 +$ (200 or 300 or 400)
- [c] The place value of 6 in 613 is (hundreds or tens or units)
- [d] The solid which has two circular bases is (cone or cylinder or sphere)
- [e] The figure  has sides. (6 or 4 or 3)
- [f] The greatest number formed from 3 digits is (635 or 700 or 999)

4 [a] Find the result :

$$\begin{array}{r} 645 \\ + 201 \\ \hline \end{array}$$

$$\begin{array}{r} 873 \\ + 123 \\ \hline \end{array}$$

$$\begin{array}{r} 543 \\ - 440 \\ \hline \end{array}$$

[b] Arrange in an ascending order : 419 , 149 , 914 and 941

The order is : , and

5 [a] Mina bought a group of toys for L.E. 200 and a mobile for L.E. 300 How much money did Mina pay ?

Mina paid = + = L.E.


[b] Join the name of each figure of each of the following :

Straight line Line segment Cylinder Cube Cone

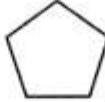




1 Complete :

- [a] The greatest 3-digit number is
- [b] 4 metres = centimetres.
- [c] 4 units , 8 tens , 3 hundreds is written in digits as
- [d] The value of the digit 6 in 654 is
- [e] The name of the figure  is

2 Choose the correct answer :

- [a] 8 hundreds , 5 units = (805 or 603 or 63)
- [b] Each face of the cube is (square or rectangle or traingle)
- [c] The smallest number formed from 7 , 5 and 8 is (785 or 578 or 875)
- [d] The number of sides of the shape  = (4 or 5 or 6)
- [e] 6 metres and 20 centimetres = cm. (206 or 26 or 620)

3 [a] Find the following : $406 + 371 =$ $688 - 154 =$

$$\begin{array}{r} 538 \\ + 124 \\ \hline \end{array}$$

$$\begin{array}{r} 532 \\ - 314 \\ \hline \end{array}$$

[b] Arrange in an ascending order : 816 , 183 , 308 and 256

The order is : , and

4 [a] Complete in the same pattern :

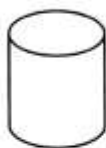
260 , 360 , 460 , , ,

[b] Compare using (< , > or =) :

(1) 659 956

(2) 6 hundreds 60 tens

5 [a] Join :



Cone

Cylinder

Straight line

[b] Ahmed bought a suit for 640 pounds and a pair of shoes for 235 pounds. How much money did Ahmed pay ?

Ahmed paid = + = pounds.



1 Find the result :

$$\begin{array}{r} 342 \\ + 224 \\ \hline \end{array}$$

$$\begin{array}{r} 958 \\ - 728 \\ \hline \end{array}$$

$$\begin{array}{r} 950 \\ - 650 \\ \hline \end{array}$$

2 Complete :

[a] 4 hundreds , 3 tens and 8 units =

[b] The smallest 3-digit number is

[c] 4 metres = centimetres

[d] 990 , 980 , , (in the same pattern)

3 Choose the correct answer :

[a] The value of the digit 5 in the number 563 is (5 or 50 or 500)

[b] 30 tens = (30 or 300 or 3)

[c] $41 + 19$ $40 + 20$ (< or = or >)

[d] The base of the cone is (circle or square or rectangle)

4 [a] Put the suitable sign (< , > or =) :

(1) $314 - 114$ 200

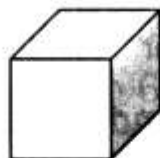
(2) $540 + 100$ $540 - 100$

[b] Arrange in an ascending order :

563 , 285 , 623 and 936

The order is : , and

5 [a] Join :



Cube

Straight line

Ray

Closed curve

[b] There are 553 boys in a school and 335 girls. Find the total number of pupils in that school ?

The total number of pupils = + = pupils.



1 Choose the correct answer :

- (1) The value of the digit 3 in the number 235 = (300 or 30 or 3)
- (2) $700 < \dots\dots\dots$ (600 or 800 or 700)
- (3) $900 + 70 + 4 = \dots\dots\dots$ (974 or 947 or 749)
- (4) 7 metres + 35 cm. = cm. (735 or 700 or 357)
- (5) Six hundred and twenty-one = (512 or 216 or 621)
- (6) The greatest number formed from 7 , 1 and 9 is
(971 or 917 or 179)
- (7) The number is between 409 and 411 (410 or 408 or 412)
- (8) The number just after 299 is (300 or 400 or 200)
- (9) $600 - 200 = \dots\dots\dots$ (100 or 400 or 200)
- (10) 210 , 220 , 230 , (in same pattern) (231 or 240 or 250)

2 Complete :

$$\begin{array}{r} 348 \\ + 114 \\ \hline \end{array}$$

$$\begin{array}{r} 569 \\ - 215 \\ \hline \end{array}$$

$$\begin{array}{r} 649 \\ + 130 \\ \hline \end{array}$$

$$\begin{array}{r} 482 \\ - 265 \\ \hline \end{array}$$


6 metres = cm.

8 hundreds , 5 units =

The greatest 3-digit number is

400 , 500 , 600 , (in same pattern)

3 [a] Join :



Cuboid

Open curve

Straight Line

Cylinder

[b] Put the suitable sign (< , = or >) :

(1) 456 4 hundreds

(3) 345 cm. 3 metres

(2) $900 + 80 + 4$ 800

(4) 6 tens 6 hundreds

4 [a] Arrange in an ascending order : 563 , 790 , 687 and 234

The order is : , and

**[b] Ahmed bought a suit for L.E. 450 and a pair of shoes for L.E. 200
How much money did he pay ?**

Ahmed paid = + = L.E.




1 Complete the following :

[a] The number six hundred and six in digits is

[b] The greatest 3-digit number is

[c] The smallest number formed from the digits 8 , 2 and 4 is

[d] The number of sides of the figure  = sides.

[e] $193 + 111 = \dots\dots\dots$


[f] $949 - 897 = \dots\dots\dots$


2 Choose the correct answer :

[a] The number which contains 9 units , 3 tens and 2 hundreds is written as (932 or 239 or 293)

[b] The cuboid has faces. (4 or 5 or 6)

[c] 584 centimetres  74 centimetres + 5 metres (> or < or =)

[d] The shape  represents (straight line or ray or line segment)

[e] The solid  is called (cylinder or sphere or cone)

[f] 7 metres + 7 centimetres = centimetres (770 or 707 or 77)

3 [a] Arrange in an ascending order : 754 , 659 , 69 and 976

The order is : , and

[b] Salwa bought a dress for 275 pounds and a pair of shoes for 125 pounds. How much money did Salwa pay ?

Salwa paid = = pounds.

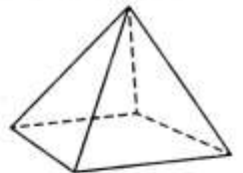
4 Complete the following :

[a] The opposite quadrilateral pyramid has vertices.

[b] The place value of the digit 3 in the number 327 is

[c] $5 + 30 + 600 = \dots\dots\dots$ [e] $(123 + 224) + 326 = 123 + (\dots\dots\dots + 326)$

[d] 800 , 700 , 600 , , (in same pattern)



5 [a] Find the result of :

$$\begin{array}{r} 216 \\ - 107 \\ \hline \end{array}$$

$$\begin{array}{r} 341 \\ + 597 \\ \hline \end{array}$$

[b] Match :



Cone

Cube

Cuboid



1 Complete :

[a] Six hundred and six =

[b] = 1 + 10 + 100

[c] 800 , 700 , 600 , , (in the same pattern)

[d] The cube has faces.

[e] 514 cm. = metres , cm.

[f] The number of line segments in the polygon  =

2 Find the result :

$$\begin{array}{r} 163 \\ + 642 \\ \hline \end{array}$$

$$\begin{array}{r} 777 \\ + 197 \\ \hline \end{array}$$

$$\begin{array}{r} 927 \\ - 415 \\ \hline \end{array}$$

$$\begin{array}{r} 805 \\ - 429 \\ \hline \end{array}$$

3 Choose the correct answer :

[a] The greatest 3-different digit number = (100 or 999 or 987)

[b] 700 cm. = metres. (7 or 70 or 700)

[c] The number 220 is less than 240 by (10 or 20 or 200)

[d] The shape \longrightarrow is called (a ray or a line segment or a polygon)

[e] $216 - 107 =$ (111 or 100 or 109)

[f] The place value of 8 in the number 978 is
(units or tens or hundreds)

4 [a] Arrange in an ascending order :

419 , 149 , 914 and 941

The order is : , , and

[b] Put (> , = or <) :

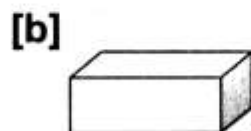
(1) 475 435

(2) $364 + 236$ 6 hundreds.

5 Write the name of each of the following figures :



.....



.....



.....





1 Find :

$$\begin{array}{r} [a] \quad 2 \ 4 \ 4 \\ + \ 5 \ 2 \ 8 \\ \hline \end{array}$$

$$\begin{array}{r} [b] \quad 7 \ 2 \ 6 \\ - \ 1 \ 3 \ 6 \\ \hline \end{array}$$

[c] $197 + 20 = \dots\dots\dots$


[d] $900 - 367 = \dots\dots\dots$

2 Choose the correct answer :

[a] The value of 3 in the number 318 is $\dots\dots\dots$ (3 or 30 or 300)

[b] Seven hundred and eighteen = $\dots\dots\dots$ (781 or 718 or 187)

[c] The base of the cone is $\dots\dots\dots$ (square or circle or rectangle)

[d] The number of line segments in  is $\dots\dots\dots$ (4 or 5 or 6)

[e] The number of edges of the cuboid is $\dots\dots\dots$ (12 or 6 or 8)

3 Complete :

[a] The greatest number formed from the digits 0 , 6 and 2 is $\dots\dots\dots$

[b] 450 centimetres = $\dots\dots\dots$ metres + $\dots\dots\dots$ centimetres

[c] 610 , 620 , 630 , $\dots\dots\dots$, $\dots\dots\dots$ (in the same pattern)

[d] 8 tens + 2 units = $\dots\dots\dots$

[e] The number just after 78 is $\dots\dots\dots$

4 Put (< , > or =) :

[a] 4 pounds 300 piastres

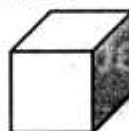
[b] 2 tens + 8 tens 2 hundreds

[c] 519 $500 + 10 + 9$

5 [a] Write the name of each figure :



(1) $\dots\dots\dots$



(2) $\dots\dots\dots$



(3) $\dots\dots\dots$

[b] Ahmed bought a bike for 560 pounds and a ball for 129 pounds.
How much money did he pay ?

Ahmed paid = $\dots\dots\dots$ + $\dots\dots\dots$ = $\dots\dots\dots$ pounds.



1 Complete each of the following :

- [a] The number 297 = units , 9 tens , hundreds.
 [b] $(125 + 243) + 654 = 243 + (125 + \dots)$
 [c] The greatest 3-digit number is
 [d] 100 , 200 , 300 , , (in the same pattern)

2 Choose the correct answer :

- [a] The value of the digit 6 in the number 613 is (600 or 60 or 6)
 [b] 9 tens = (900 or 90 or 9)
 [c] number of the sides of the triangle is sides. (2 or 3 or 4)
 [d] The number 690 is more than number 490 by (2 or 20 or 200)

3 [a] Find the result of each of the following :

(1) $144 + 456 = \dots$ (2) $829 - 119 = \dots$

[b] Arrange the following numbers in an ascending order :

105 , 530 , 312 and 560

The order is : , and

4 Compare using (< , > or =) :

- [a] 800 80 tens
 [b] 499 307
 [c] 4 metres 444 centimetres
 [d] The number of faces of the cuboid the number of faces of the cube

5 [a] Shimaa bought some toys for L.E. 224 and a mobile for L.E. 635

How much money did Shimaa pay ?

Shimaa paid = + = L.E.

[b] Write the name of each of the following :



(1)



(2)




(3)




(4)



1 Choose the correct answer :

- [a] $325 = \dots + 25$ (3 or 30 or 300)
 [b] The cube has faces. (6 or 8 or 12)
 [c] The number just before 505 is (404 or 506 or 504)
 [d] 8 metres 80 centimetres (< or = or >)
 [e] 5 hundreds , 4 tens = (504 or 540 or 450)
 [f] Number of sides of the polygon  = (3 or 4 or 2)

2 Complete each of the following :


- [a] The shape  is called [b] $138 + 25 = 25 + \dots$
 [c] 5 metres + 30 centimetres = centimetres.
 [d] The value of the digit 5 in the number 753 is
 [e] The number of edges of the cuboid =
 [f] The greatest number formed from the digits 2 , 5 and 7 is

3 [a] Find the result (1) $452 + 375 = \dots$ (2) $850 - 619 = \dots$

[b] Write the name of each solid of the following :



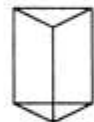
.....



.....




.....



.....

4 Choose the correct answer from the column (A) to the column (B) :

(A)	(B)
[a] The place value of 3 in the number 362 is	• 111
[b] The greatest number formed from 3 digits is	• tens
[c] $654 - 543 = \dots$	• hundreds
[d] 9 hundreds + 9 tens =	• 999
[e] The number just after 659 is	• open curve
[f]  is called	• 660
	• 990

5 [a] Ahmed has 537 pounds , his father gave him 350 pounds.

How much money does he have ?

Ahmed has = + = pounds.

[b] Arrange in an ascending order : 532 , 253 , 99 , 523 and 235

The order is : , , , and



1 Find the result of :

$$\begin{array}{r} 425 \\ + 389 \\ \hline \end{array}$$

$$\begin{array}{r} 976 \\ - 628 \\ \hline \end{array}$$

$$326 + 653 = \dots\dots\dots$$

$$900 - 200 = \dots\dots\dots$$

2 Choose the correct answer :

- [a] The value of the digit 7 in the number 754 (700 or 70 or 7)
 [b] 5 hundreds , 6 tens and 3 units = (563 or 536 or 653)
 [c] The greatest number that could be formed from the digits 5 , 7 and 1
 is (517 or 751 or 175)
 [d] Number of faces of the cuboid is (6 or 8 or 12)
 [e] 8 hundreds = tens. (8 or 80 or 800)
 [f] The figure \longleftrightarrow is called a (line segment or ray or straight line)

3 Complete :

- [a] The smallest 3-digit number is [b] 6 m and 25 cm = cm
 [c] 545 piastres = pounds and piastres.
 [d] The place value of the digit 2 in the number 245
 [e] 350 , 450 , 550 , , (in the same pattern)
 [f] The number just after 296 is

4 [a] Write the name of each of the following :




.....

.....

.....

.....

[b] Put (✓) under each of the two congruent figures of the following :



()

()

()

()

()

5 [a] Arrange in a descending order : 445 , 894 , 362 and 949


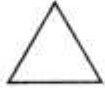
Descending order is :

[b] Mustafa has 750 piastres. He gave 275 piastres to his sister Salma.
 How much money left with him ?

The left money = - = piastres.



1 Choose the correct answer :

- [a] The value of the digit 4 in the number 564 is (40 or 400 or 4)
 [b] The base of the cone is in the form of a (circle or square or rectangle)
 [c] The shape  represents (ray or straight line or line segment)
 [d] The greatest 3-digit number is (999 or 100 or 111)
 [e] number of sides in the figure  = sides. (2 or 3 or 5)
 [f] The number nine hundred and thirteen = (419 or 913 or 903)

2 Complete the following :

- [a] $635 = 600 + \dots + \dots$
 [b] $299 + (351 + 88) = (\dots + 351) + 88$
 [c] The number of faces of the cube is
 [d] 4 units , 6 tens , 3 hundreds is written in digits as
 [e] 728 cm. = metres and centimetres.
 [f] 100 , 200 , 300 , , (in the same pattern)

3 Put (< , > or =) :

- [a] $410 + 35$ 475
 [b] 3 hundreds 30 tens
 [c] 537 cm. 5 metres
 [d] $372 - 272$ 200

4 [a] Find the result of :

$$\begin{array}{r} 543 \\ + 184 \\ \hline \end{array}$$

$$\begin{array}{r} 931 \\ - 119 \\ \hline \end{array}$$

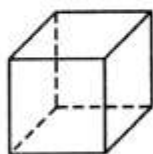
- [b] Arrange in an ascending order : 438 , 148 , 380 and 264

The order is : , and

**5 [a] Mai had 245 pounds , her father gave her 315 pounds.
How much money with Mai ?**

Mai has = + = pounds.

[b] Join :



Open curve

Cube

Ray

Cone



1 Complete :

- [a] 9 units , 6 tens and 4 hundreds = [b] Cuboid has edges.
[c] 784 cm. = cm. + metres [d] $900 - 567 = \dots\dots\dots$
[e] Place value of 2 in number 236 is
[f] The centimetre and metre are used for measuring

2 Choose the correct answer :

- [a] five hundred and seventy-seven in digits is (577 or 757 or 775)
[b] The smallest 3 different digits number is (102 or 123 or 100)
[c] The number 456 is more than 446 by (1 or 10 or 100)
[d] The number just before 500 is (400 or 501 or 499)
[e] The solid which has one vertex and 1 circular base is
(cone or prism or cube)
[f] Thirty-six tens and four units in digits = (364 or 463 or 436)

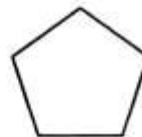
3 Put the suitable sign (< , > or =) :

- [a] $123 + 389$ 511 [c] 60 cm. 6 metres
[b] $643 - 125$ 500 [d] 2 tens 2 hundreds
[e] The number of vertices of a cube the number of vertices of cuboid.
[f] 3 units and 9 hundreds 903

**4 [a] Sara bought a toy for 415 pounds , if she had 550 pounds.
How much money was left with her ?**

The left money = - = pounds.

[b] Write the name of each :

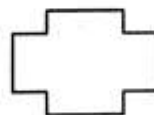



5 [a] Rearrange in an ascending order :

872 , 827 , 863 and 819

The order is : , , and

[b] Write the number of line segments of each :





1 Complete :

- [a] 600 , 500 , , 300 , (in the same pattern)
 [b] 3 metres = centimetres.
 [c] Cube has faces.
 [d] The greatest number formed from 4 , 5 and 9 is
 [e] The place value of 8 in 853 is
 [f] $473 = \dots + 70 + \dots$

2 Choose the correct answer :

- [a] $99 \square 111$ ($<$ or $>$ or $=$)
 [b] The figure \longleftrightarrow is (line segment or ray or straight line)
 [c] 4 units , 3 tens , 6 hundreds = (436 or 634 or 643)
 [d] The smallest different 3-digit number is (102 or 100 or 999)
 [e] The number of vertices of cuboid is (6 or 8 or 12)
 [f] The number just after 349 is (350 or 449 or 348)

3 Find :

$$\begin{array}{r} 487 \\ + 108 \\ \hline \end{array}$$

$$\begin{array}{r} 629 \\ - 185 \\ \hline \end{array}$$

4 [a] Arrange in an ascending order :

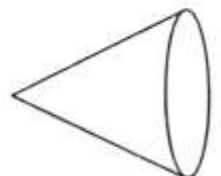
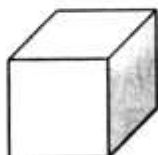
427 , 300 , 298 and 289

The order is : , , and

- [b] Sara had L.E. 700 She bought a fan for L.E. 450
 Find the remainder with her.

The remainder = - =

5 Join :



Cube

Cylinder

Cone




1 Complete :

[a] $467 = 7 + \dots + 400$

[b] The cube has faces.

[c] The smallest 3-digit number is [d] $756 - 106 = \dots$

[e] The number of sides of the polygon  =

2 Choose the correct answer :

[a] 5 hundreds , 4 tens , 6 units = (645 or 546 or 564)

[b] The value of the digit 4 in the number 478 is (4 or 40 or 400)

[c] $232 \square 99$ (> or = or <)

[d] The greatest 3-digit number is (111 or 999 or 900)

[e] The number of edges of the cuboid = (6 or 8 or 12)

3 Find :

[a]
$$\begin{array}{r} 423 \\ + 465 \\ \hline \end{array}$$

[b]
$$\begin{array}{r} 432 \\ + 268 \\ \hline \end{array}$$

[c]
$$\begin{array}{r} 800 \\ - 245 \\ \hline \end{array}$$

4 [a] Write the name of each of the following :



(1)



(2)



(3)



(4)

[b] Arrange in an ascending order :

419 , 149 , 941 and 914

The order is : , , and

5 [a] If the number of pupils in primary school is 780 and the number of boys is 438 Find the number of girls.

The number of girls = - =


[b] Complete :

(1) 432 , 532 , 632 , , (in the same pattern)

(2) 5 metres , 43 centimetres = centimetres.



1 Choose the correct answer from the given ones :

- [a] The smallest number formed from 2 , 8 and 5 is
(852 or 582 or 258)
- [b] $999 - 444 =$
(555 or 444 or 333)
- [c] $873 \square 781$
($>$ or $=$ or $<$)
- [d] The value of digit 4 in the number 946 is
(400 or 40 or 4)
- [e] The name of  is (open curve or closed curve or line segment)

2 [a] Find the result :

$$\begin{array}{r} 345 \\ + 597 \\ \hline \end{array}$$

$$\begin{array}{r} 842 \\ - 219 \\ \hline \end{array}$$

[b] Arrange in a descending order : 236 , 623 , 451 , 526 and 612

The order is : , , and


3 Complete :

- [a] 7 units , 4 tens and 5 hundreds =
- [b] 20 tens = hundreds
- [c] $(523 + 211) + 108 = \dots + (211 + 108)$
- [d] metres = 400 centimetres
- [e] 990 , 980 , , (in the same pattern)
- [f] The smallest 3-digit number is

4 [a] Huda bought a toy for 186 pounds and another one for 123 pounds.
How much money did she pay ?

What she paid = + = pounds.

[b] Match each solid to its name :



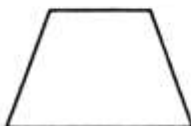
Cone

Cube

Cuboid

Cylinder

5 [a] Write the number of the line segments



.....

.....

[b] Put ($<$, $>$ or $=$) :

(1) $684 \square 864$

(2) $809 + 129 \square 847$

(3) $543 \square 43 + 500$



1 Complete :

[a] $582 = 500 + \dots + 2$

[b] 7 metres = centimetres

[c] $(215 + 317) + 356 = 215 + (317 + \dots)$

[d] The figure \longrightarrow is called

2 Choose the correct answer :


[a] The value of the digit 5 in 753 is (5 or 50 or 500)

[b] The number of edges of the cuboid is (12 or 8 or 6)

[c] The number just before 440 is (499 or 441 or 439)

[d] The smallest number formed 3 different digits is
(102 or 231 or 123)

3 Join :

(A)	(B)
[a] The number of line segments in  is	• 915
[b] 9 units , 6 tens , 4 hundreds =	• 540
[c] 9 metres and 15 centimetres = centimetres.	• 3
[d] $214 + 326 = \dots$	• 469

4 [a] Write the name of each figure :



(1)



(2)



(3)



(4)

[b] Complete in the same pattern :

305 , 315 , 325 , , ,

5 [a] Arrange in an ascending order :

872 , 227 , 835 and 518

The order is : , , and

[b] Ahmed reads a book contains 241 pages, he read 150 pages.
What's the remainder ?

The remainder = - = pages.