

1) Draw  according to the number:

21

22

23

24

25

26

2) Colour according to the given number as the example.

21

22

23

24

25

26

27

28

29

3) Write three times.

20	21	22	23	24	25	26	27	28	29

4) Complete as the example.

a) $21 = 20$ and 1

b) $22 = \dots\dots\dots$ and $\dots\dots\dots$

c) $23 = \dots\dots\dots$ and $\dots\dots\dots$

d) $24 = \dots\dots\dots$ and $\dots\dots\dots$

e) $25 = \dots\dots\dots$ and $\dots\dots\dots$

f) $26 = \dots\dots\dots$ and $\dots\dots\dots$

g) $27 = \dots\dots\dots$ and $\dots\dots\dots$

h) $28 = \dots\dots\dots$ and $\dots\dots\dots$

i) $29 = \dots\dots\dots$ and $\dots\dots\dots$

5) Complete as the example.

- a) 21 = 2 tens and 1 unit
- b) 22 = tens and units
- c) 23 = tens and units
- d) 24 = tens and units
- e) 25 = tens and units
- f) 26 = tens and units
- g) 27 = tens and units
- h) 28 = tens and units
- i) 29 = tens and units

6) Write the following numbers in digits

- | | |
|-----------------------|-----------------------|
| a) Twenty four | f) Twenty one |
| b) Twenty six | g) Twenty two |
| c) Twenty nine | h) Twenty three |
| d) Twenty eight | i) Twenty seven |
| e) Twenty five | |

7) Write the following numbers in letters

- a) 24
- b) 28
- c) 26
- d) 22
- e) 21
- f) 29
- g) 23
- h) 25
- i) 27

8) Complete as the example.

0	1		3	4		6	7	8	
10			13			16			19
		22							

0					5				
				14				18	
			23						

9) Draw  according to the number:



31




32



33



34


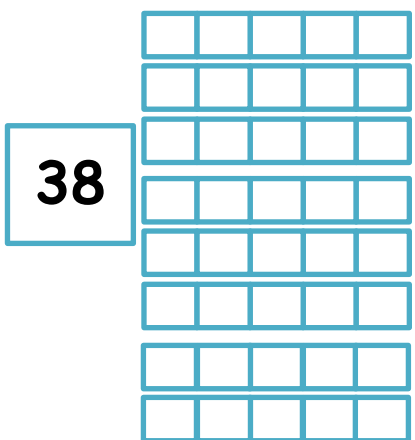
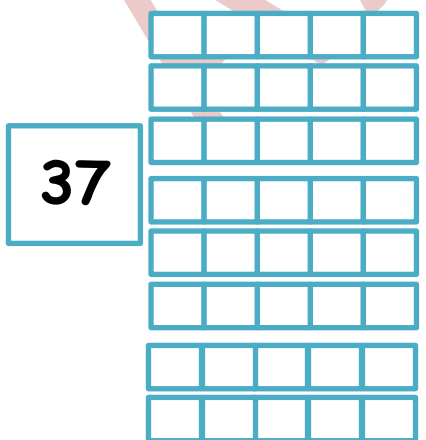
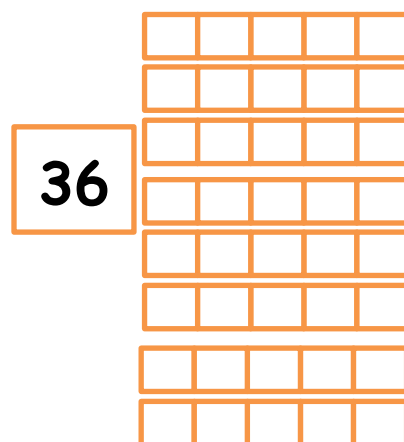

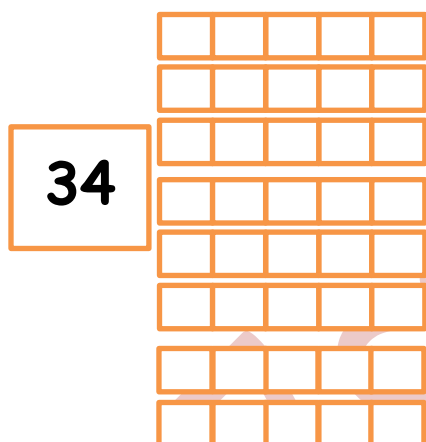
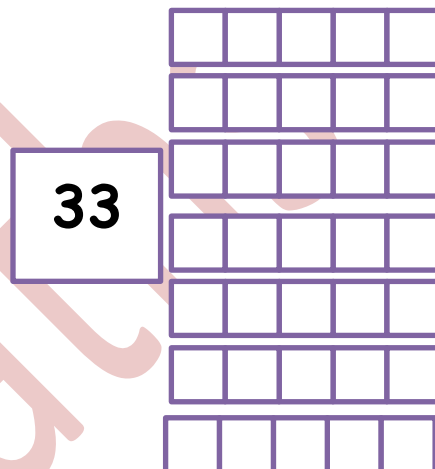
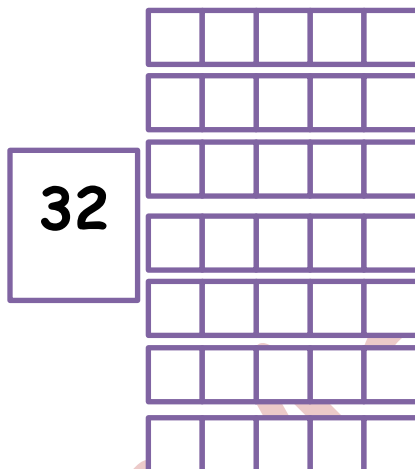
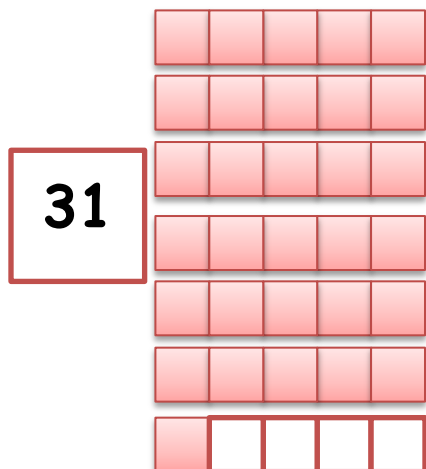


35



36

10) Colour according to the given number as the example.



11) Write three times.

30	31	32	33	34	35	36	37	38	39

12) Complete as the example.

a) $31 = 30$ and 1

b) $32 = \dots\dots\dots$ and $\dots\dots\dots$

c) $33 = \dots\dots\dots$ and $\dots\dots\dots$

d) $34 = \dots\dots\dots$ and $\dots\dots\dots$

e) $35 = \dots\dots\dots$ and $\dots\dots\dots$

f) $36 = \dots\dots\dots$ and $\dots\dots\dots$

g) $37 = \dots\dots\dots$ and $\dots\dots\dots$

h) $38 = \dots\dots\dots$ and $\dots\dots\dots$

i) $39 = \dots\dots\dots$ and $\dots\dots\dots$

13) Complete as the example.

a) $31 = 3$ tens and 1 unit

b) $32 = \dots\dots\dots$ tens and $\dots\dots\dots$ units

c) $33 = \dots\dots\dots$ tens and $\dots\dots\dots$ units

d) $34 = \dots\dots\dots$ tens and $\dots\dots\dots$ units

e) $35 = \dots\dots\dots$ tens and $\dots\dots\dots$ units

f) $36 = \dots\dots\dots$ tens and $\dots\dots\dots$ units

g) $37 = \dots\dots\dots$ tens and $\dots\dots\dots$ units

h) $38 = \dots\dots\dots$ tens and $\dots\dots\dots$ units

i) $39 = \dots\dots\dots$ tens and $\dots\dots\dots$ units

14) Write the following numbers in digits

a) Thirty four $\dots\dots\dots$

b) Thirty six $\dots\dots\dots$

c) Thirty nine $\dots\dots\dots$

d) Thirty eight $\dots\dots\dots$

e) Thirty five $\dots\dots\dots$

f) Thirty one $\dots\dots\dots$

g) Thirty two $\dots\dots\dots$

h) Thirty three $\dots\dots\dots$

i) Thirty seven $\dots\dots\dots$

15) Write the following numbers in letters

j) 34

k) 38

l) 36

m) 33

n) 31

o) 39

p) 32

q) 35

r) 37

16) Complete as the example.

0	1		3	4		6	7	8	
10			13			16			19
		22							
	31								

0					5				
				14				18	
			23						
					35				

17) Draw  according to the number:



41



42




43



44



45



46

18) Colour according to the given number as the example.

41

42

43

44

45

46

47

48

49

19) Write three times.

40	41	42	43	44	45	46	47	48	49

20) Complete as the example.

a) $41 = 40 \text{ and } 1$

b) $42 = \dots\dots\dots \text{ and } \dots\dots\dots$

c) $43 = \dots\dots\dots \text{ and } \dots\dots\dots$

d) $44 = \dots\dots\dots \text{ and } \dots\dots\dots$

e) $45 = \dots\dots\dots \text{ and } \dots\dots\dots$

f) $46 = \dots\dots\dots \text{ and } \dots\dots\dots$

g) $47 = \dots\dots\dots \text{ and } \dots\dots\dots$

h) $48 = \dots\dots\dots \text{ and } \dots\dots\dots$

i) $49 = \dots\dots\dots \text{ and } \dots\dots\dots$

21) Complete as the example.

a) 41 = 4 tens and 1 unit

b) 42 = tens and units

c) 43 = tens and units

d) 44 = tens and units

e) 45 = tens and units

f) 46 = tens and units

g) 47 = tens and units

h) 48 = tens and units

i) 49 = tens and units

22) Write the following numbers in digits

a) Forty four

b) Forty six

c) Forty nine

d) Forty eight

e) Forty five

f) Forty one

g) Forty two

h) Forty three

i) Forty seven

23) Write the following numbers in letters

a) 44

b) 48

c) 46

d) 43

e) 41

f) 49

g) 42

h) 45

i) 47

24) Complete as the example.

0	1		3	4		6	7	8	
10			13			16			19
		22							
	31								
				44					