

Final Revision

Complete using the following (< , > , =)

245 324

550 550

610 805

333 410

341 682

982 532

Choose the correct answer from the following:

2 hours and quarter an hour =minutes

(75 or 135 or 160)

120 minutes = Hour

(2 , 3 , 5)

1 hour and 17 minutes= minutes.

(57 , 67 , 77)

Complete the following:

The solid whose faces are all squares is

The solid whose faces are all is triangles

The solid whose faces are all rectangles.....

Arrange the following numbers ascendingly and descendingly:

624 , 357 , 425 , 286

Ascending order : , , ,

Descending order: , , ,

Complete the following :

425 cm. = m . + cm.

735 cm. =m. +cm.

430 cm. =m. +cm.

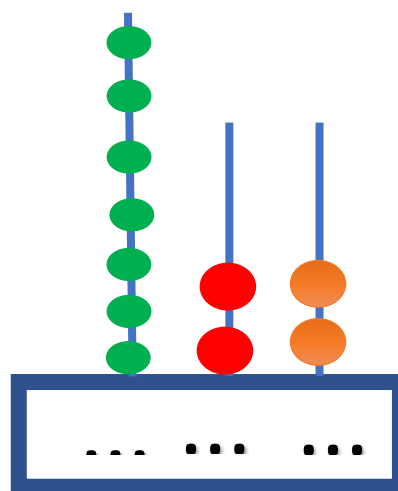
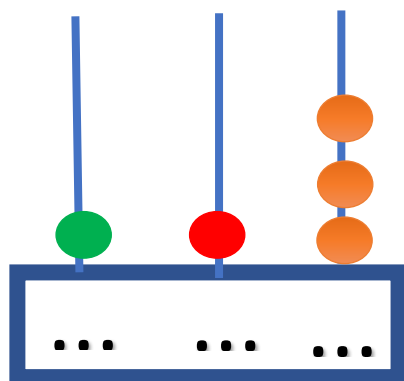
Write the following numbers 257, 752 , 275 in their specified places so that the numbers are in ascending order

183	249			659		957
-----	-----	--	--	-----	--	-----

Write the following numbers 444, 730 , 268 in their specified places so that the numbers are in descending order

980		650	510		300	
-----	--	-----	-----	--	-----	--

Complete:



March

February

April

November

january

May

August

June

October

September

December

July

1-

2

3-.....

4-

5-

6-

7-

8-

9-

10-

11-

12-

Complete the following:

How old is Mariam?.....

How old is Marwan?.....

How old is Ahmed?.....

How old is Eisha?.....

<u>Name</u>	<u>Age</u>
<u>Ahmed</u>	<u>6</u>
<u>Mariam</u>	<u>3</u>
<u>Eisha</u>	<u>8</u>
<u>Marwan</u>	<u>5</u>

Complete the table:

Number	Adding 1	Adding 10	Adding 100
499
.....	745
.....	806
.....	634
.....

Put (✓) under the lightest one:

()



()



()



()

()

()

Put (< or > or =):399 391401 four hundred and one.645 654700 seven hundred.**Complete:**

100 , , 300 , , , 600 ,

800 , , 600 , 500 , , ,

Choose the closest answer:

Watermelon weight=(5kg , 100 kg. , 77kg.)

Weight of elephant=..... (9kg.,90kg,900kg)

Weight of hen = (15 kg. , 3 kg. , 300 kg.)

Complete the following table:

Number	564	387	419	159	730	794
Tens digit	6					
Tens digit value	60					

Complete:

$$9+80+600= \dots\dots\dots$$

$$6+40+800= \dots\dots\dots$$

$$0+10+500= \dots\dots\dots$$

$$4+30+900= \dots\dots\dots$$

Write the following numbers in word form:

123.....

654.....

967.....

Estimate the result:

12	→
<u>+ 36</u>	→	+ <u>.....</u>
	

28	→
<u>+30</u>	→	<u>+</u>
	

Add using double of number strategy:

$$4+5$$

$$.....+.....+..... =$$

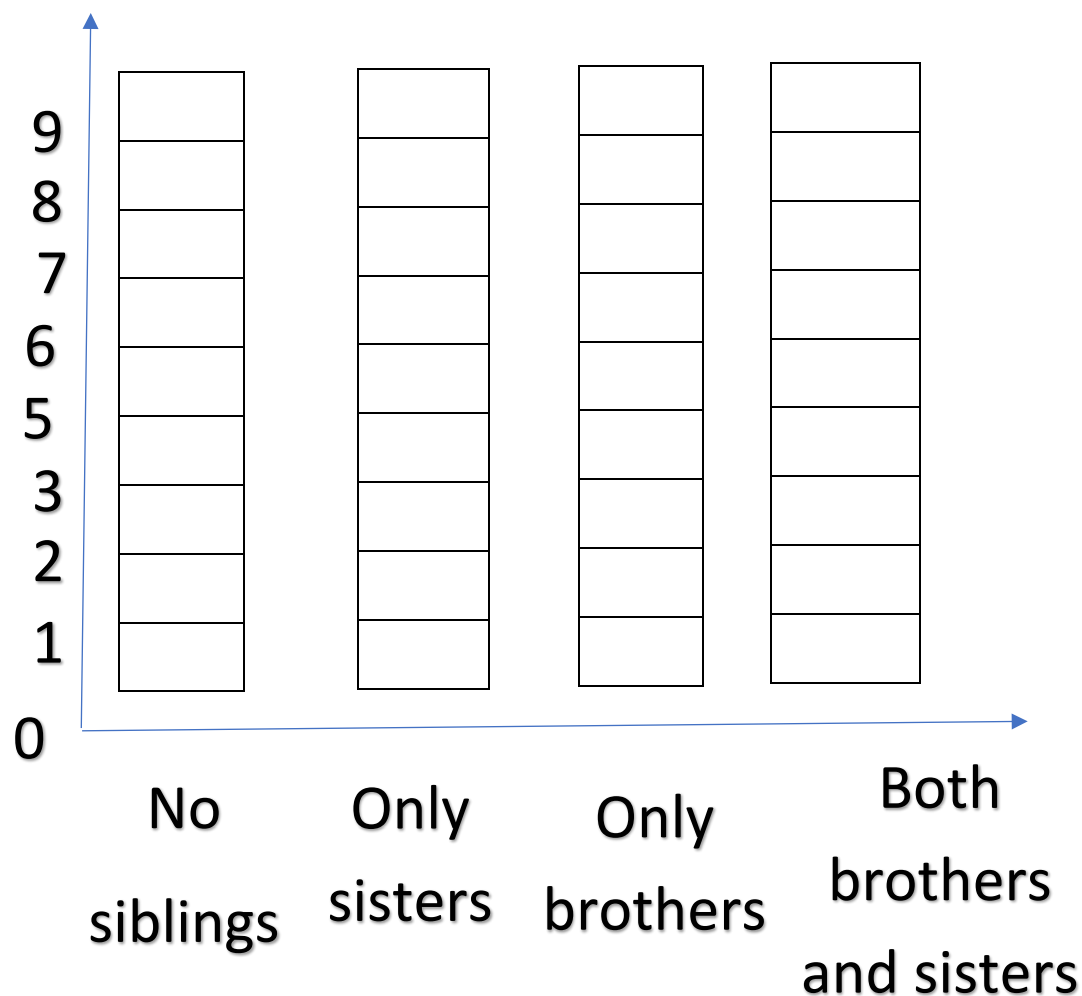
$$3+4$$

$$.....+.....+..... =$$

When students are asked about the number of siblings that are owned by girls and boys, and this is recorded in the following table

Number of students	The brothers
3	No siblings
5	Only sisters
3	Only brothers
7	Both brothers and sisters

Complete the following chart:



Complete:

$1+1= \dots\dots$

$6+6= \dots\dots$

$4+4= \dots\dots$

$5+5= \dots\dots$

$7+7= \dots\dots$

$10+10= \dots\dots$

$10 - 5 = \dots\dots$

$13+3= \dots\dots$

$6+1= \dots\dots$

$9 - 3 = \dots\dots$

$8+3 = \dots\dots$

$5+3 = \dots\dots$

Complete the following table using making 10 strategy

$$4 + \dots = 10$$

$$\dots + 4 = 10$$

$$2 + \dots = 10$$

$$\dots + 2 = 10$$

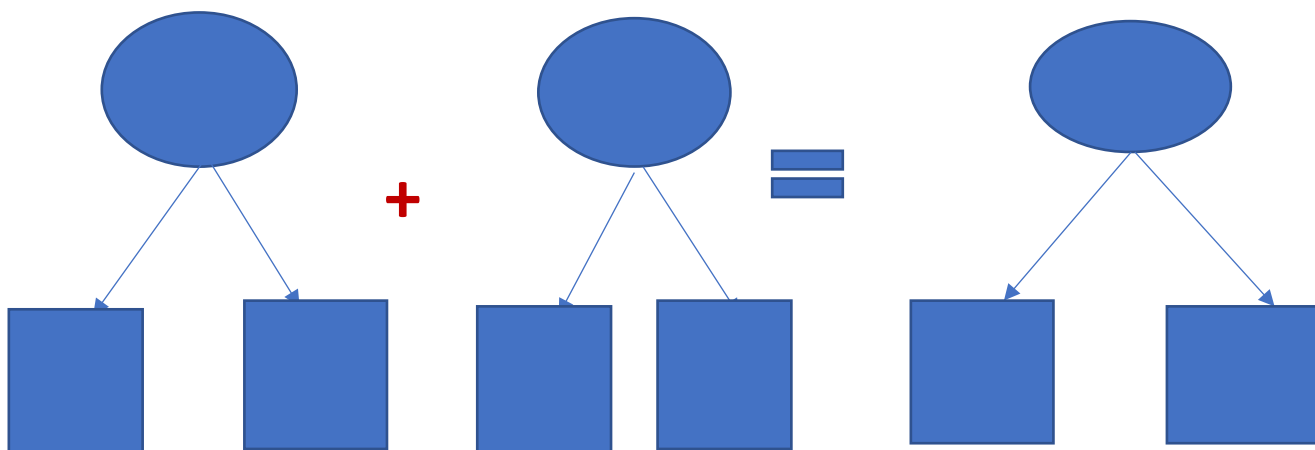
Ahmed bought a packet of milk for 36 pounds, and a candy for 12 pounds, so what I paid for it.

$$\dots + \dots = \dots$$

ones	tens

ones	Tens


ones	tens




Put (< or > or =):

1 kg.  1/2 kg.

1/4 kg  1/4 kilogram

1/2 kg  1/4 kg.+1/4kg

1 kg  1/2 kg+1/2 kg.

Put  around the number which express the place value:

Ones 9 4 5

Hundreds 6 1 1

Tens 2 9 7

Estimate the result using place value strategy

With Mona L.E 74, she bought a toy for L.E26.

Estimate the remainder with her

.....

Complete adding and subtracting the following numbers:

(a) $16+3= \dots\dots\dots$

(b) $13 _ \dots = 7$

c) $5 + \dots\dots\dots = 15$

(d)..... $_ 10 = 5$

(e) $9 - 3 = \dots\dots\dots$

(f) $9 - 6 = \dots\dots\dots$

Complete:

5 tens + $\dots\dots\dots$ = 8 tens

$\dots\dots\dots$ + $\dots\dots\dots$ = 9 tens

$\dots\dots\dots$ + 4 tens = 5 tens

10 tens – 5 tens = $\dots\dots\dots$ tens

8 tens - $\dots\dots\dots$ = 4 tens

Choose the correct answer:

The height of the classroom in meters ism.

(4 or 50 or 300)

Lamia saw 6 butterflies and she saw another 5 butterflies, how many butterflies did Lamia see in total?

.....
.....

Write the number of vertices for each shape:



.....



.....



.....

Choose the correct answer:

1 hour = minutes (60 , 20 , 30)

2 m. = cm. (2 , 20 , 200)

The length of the pencil =cm (10 , 300 , 50)

Arrange the following numbers in an ascending order:

425 , 325 , 524 , 523 , 125

The order is

..... , , , ,



تفوقه في أي عمل عليه العلامة ري



تابع جديد زاكروولي على موقعنا
<https://www.zakrooly.com>

اكتب زاكروولي في البحث وانضم لجروبات زاكروولي
مع رياض الأطفال للصف الثالث الاعدادي